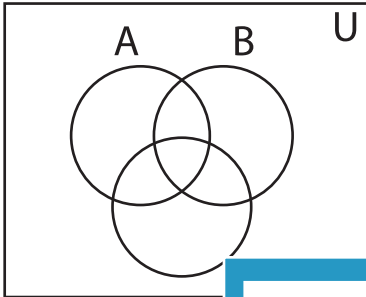


Shading - Venn Diagram

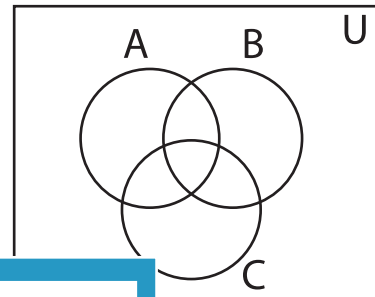
L1S3

Shade the given region.

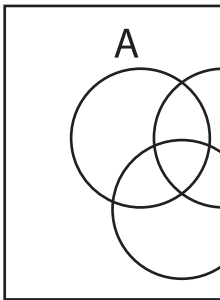
1) $B \cap C$



2) $A \cap B'$

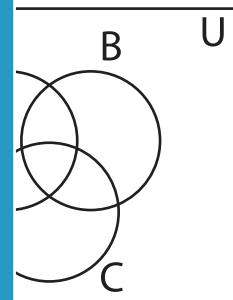


3) B'

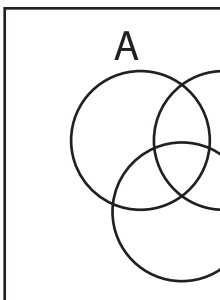


PREVIEW

Gain complete access to the largest
collection of worksheets in all subjects!

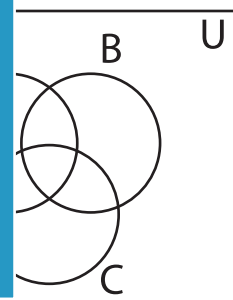


5) $(A \cup C)'$

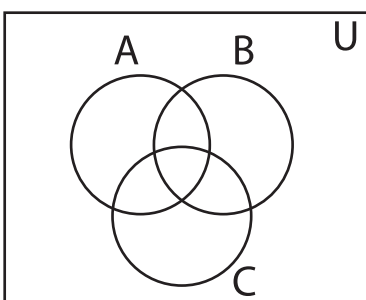


Members, please
log in to
download this
worksheet.

Not a member?
Please sign up to
gain complete
access.



7) $B' \cup C$



8) $(A \cap B)'$

