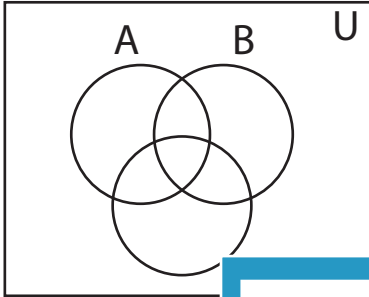


## Shading - Venn Diagram

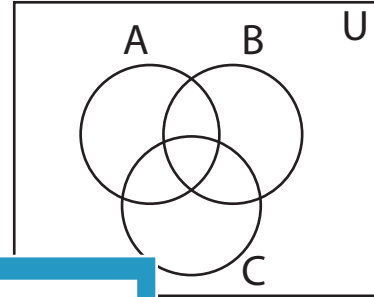
L1S4

Shade the given region.


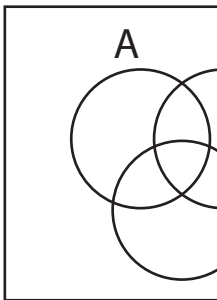
1)  $(B' \cap C)'$



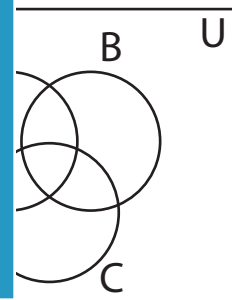
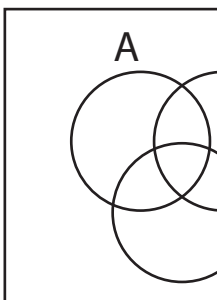
2)  $B \cup C'$



3)  $B \cap C'$



5)  $(A' \cup C)'$



# PREVIEW

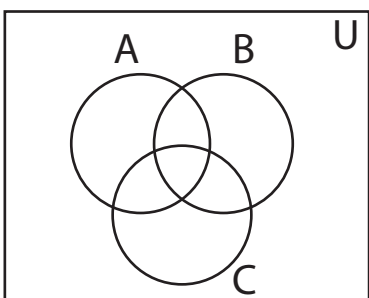
Gain complete access to the largest  
collection of worksheets in all subjects!

Members, please  
log in to  
download this  
worksheet.

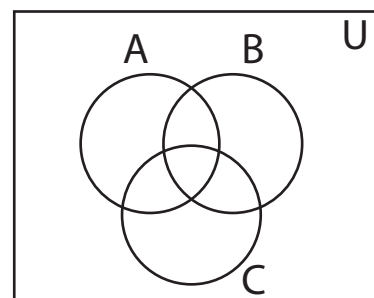
Not a member?  
Please sign up to  
gain complete  
access.

[www.mathworksheets4kids.com](http://www.mathworksheets4kids.com)

7)  $B' \cap C'$



8)  $(A' \cup C)'$

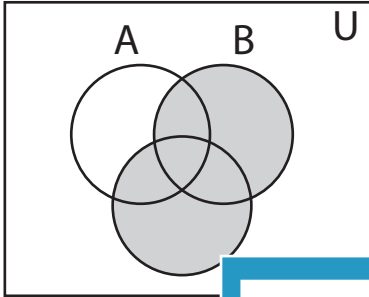


**Answer key****Shading - Venn Diagram**

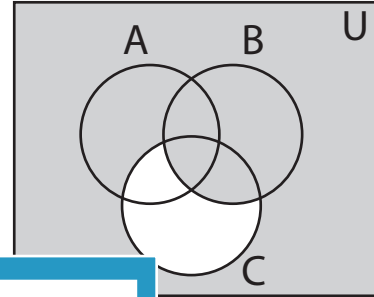
L1S4

Shade the given region.

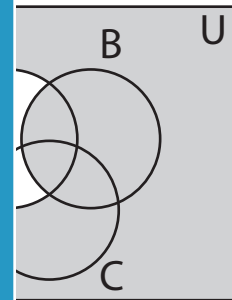
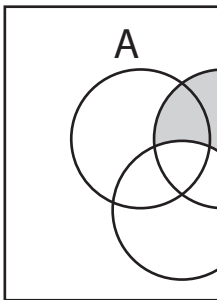
1)  $(B' \cap C)'$



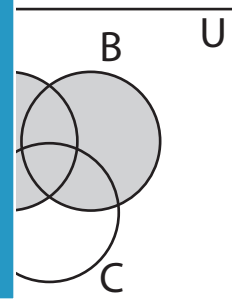
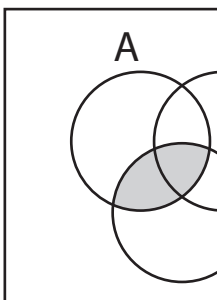
2)  $B \cup C'$



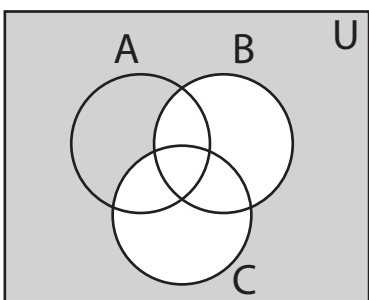
3)  $B \cap C'$



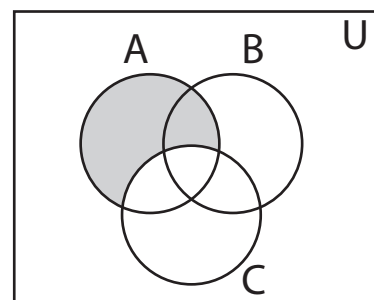
5)  $(A' \cup C)'$



7)  $B' \cap C'$



8)  $(A' \cup C)'$

**PREVIEW**

Gain complete access to the largest collection of worksheets in all subjects!

Members, please log in to download this worksheet.

Not a member? Please sign up to gain complete access.

[www.mathworksheets4kids.com](http://www.mathworksheets4kids.com)