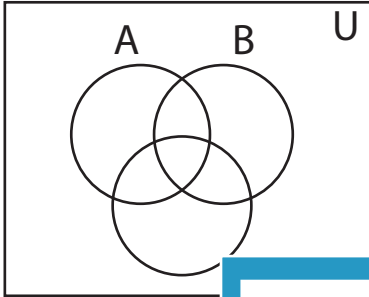


Shading - Venn Diagram

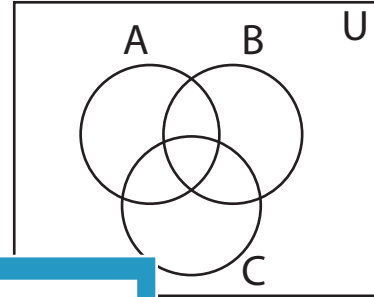
L155

Shade the given region.

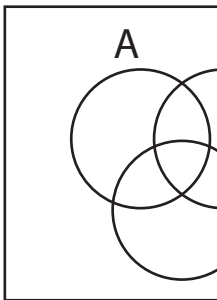
1) $(A' \cap C)'$



2) $B' \cap C$




3) $(A' \cup B)'$

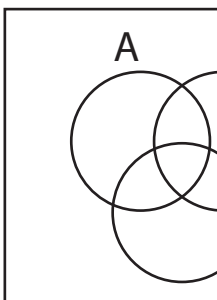


PREVIEW

Gain complete access to the largest
collection of worksheets in all subjects!

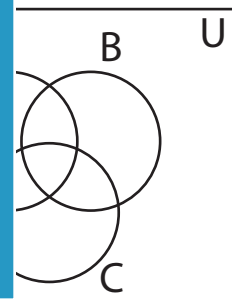


5) $(B \cap C)'$

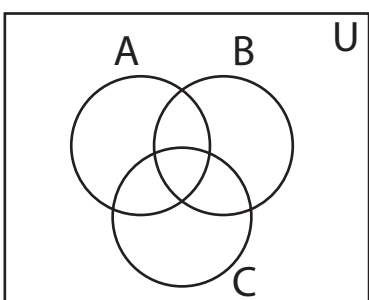


Members, please
log in to
download this
worksheet.

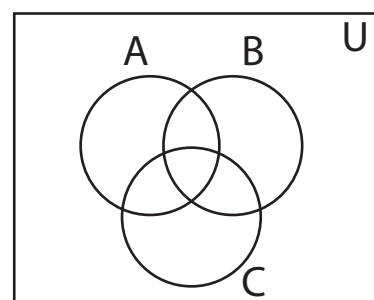
Not a member?
Please sign up to
gain complete
access.



7) $(B' \cap C)'$



8) $B \cup C$

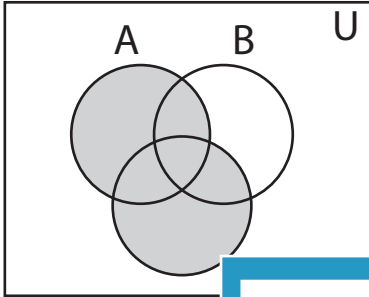


Answer key**Shading - Venn Diagram**

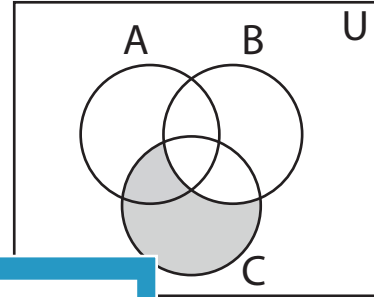
L155

Shade the given region.

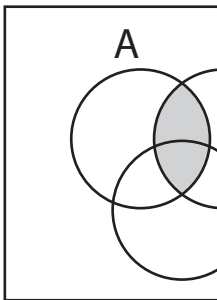
1) $(A' \cap C)'$



2) $B' \cap C$



3) $(A' \cup B)'$



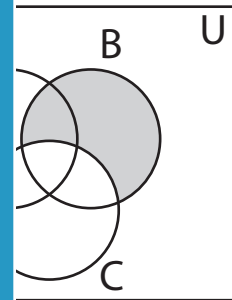
PREVIEW

Gain complete access to the largest collection of worksheets in all subjects!

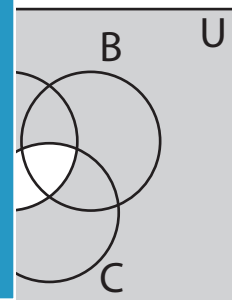
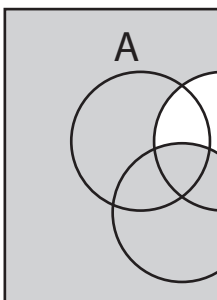
Members, please log in to download this worksheet.

Not a member? Please sign up to gain complete access.

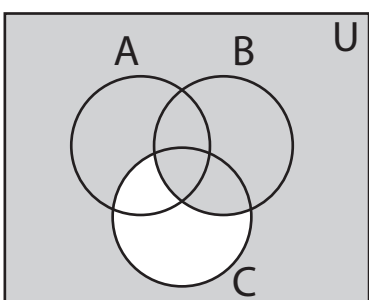
www.mathworksheets4kids.com



5) $(B \cap C)'$



7) $(B' \cap C)'$



8) $B \cup C$

