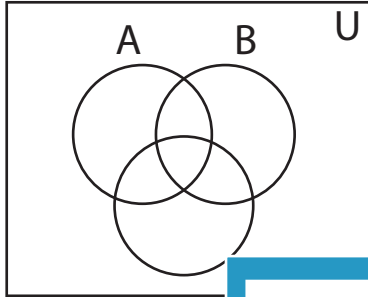


Shading - Venn Diagram

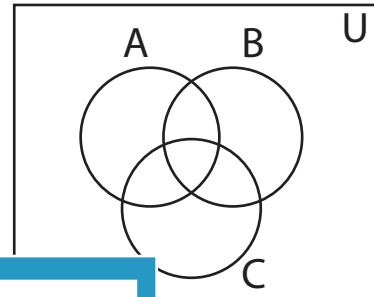
L2S1

Shade the given region.

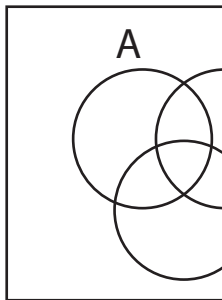
1) $(A \cap C)'$



2) $C' - B'$



3) $B - C$




PREVIEW

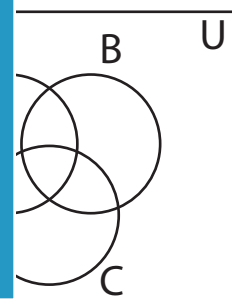
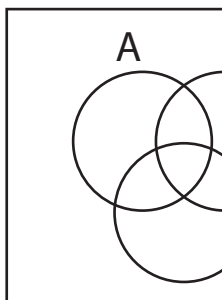
Gain complete access to the largest
collection of worksheets in all subjects!

Members, please
log in to
download this
worksheet.

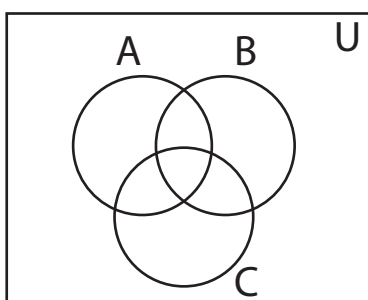
Not a member?
Please sign up to
gain complete
access.



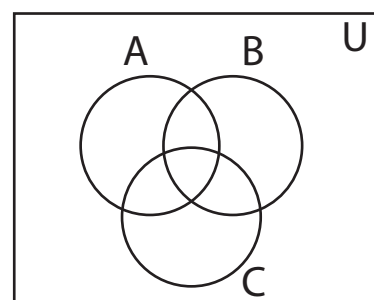
5) $B' - A$



7) $A - B'$



8) $B \cup C$

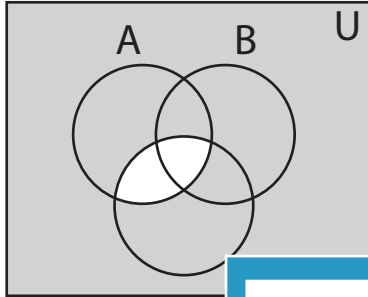


Answer key**Shading - Venn Diagram**

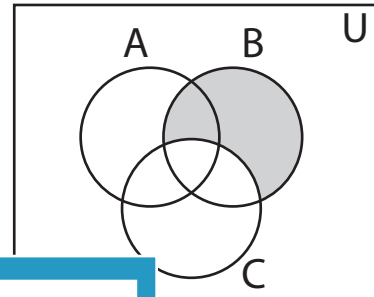
L2S1

Shade the given region.

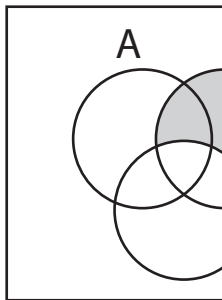
1) $(A \cap C)'$



2) $C' - B'$



3) $B - C$



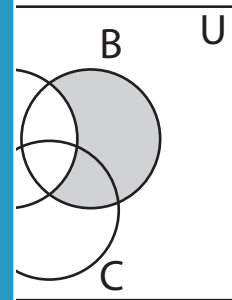
PREVIEW

Gain complete access to the largest collection of worksheets in all subjects!

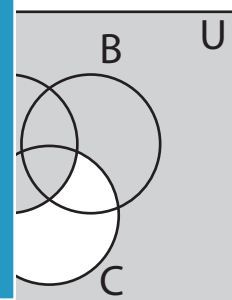
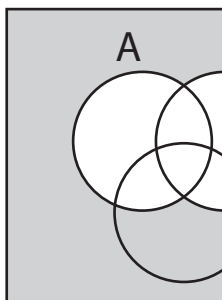
Members, please log in to download this worksheet.

Not a member? Please sign up to gain complete access.

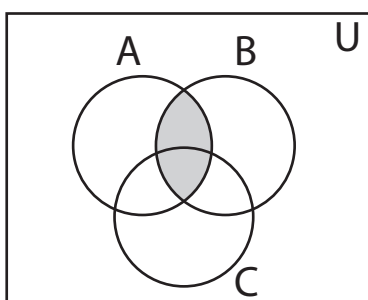
www.mathworksheets4kids.com



5) $B' - A$



7) $A - B'$



8) $B \cup C$

