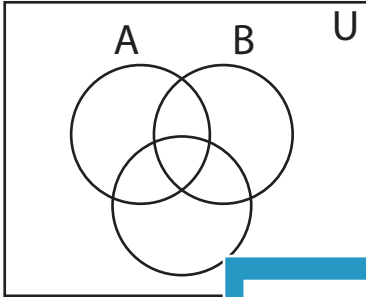


Shading - Venn Diagram

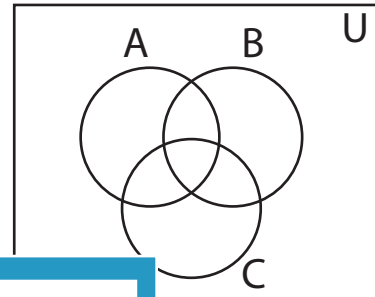
L2S2

Shade the given region.

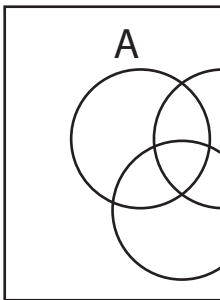
1) $C - A'$



2) C'



3) $A' - B$




PREVIEW

Gain complete access to the largest
collection of worksheets in all subjects!

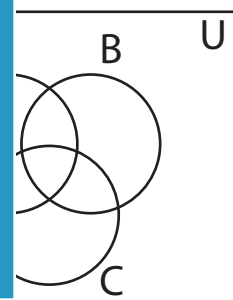
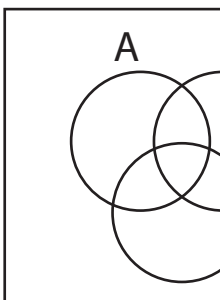
Members, please
log in to
download this
worksheet.

Not a member?
Please sign up to
gain complete
access.

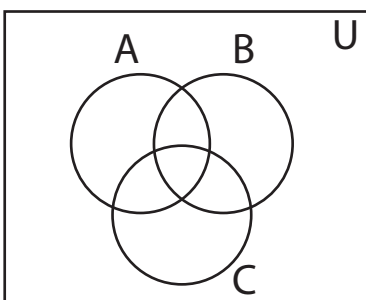
www.mathworksheets4kids.com



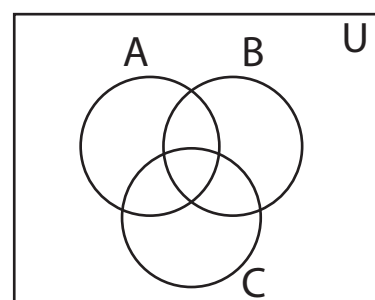
5) $B' \cap C'$



7) $(C - B)'$



8) $A \cup B'$

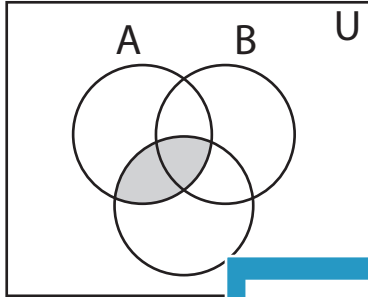


Answer key**Shading - Venn Diagram**

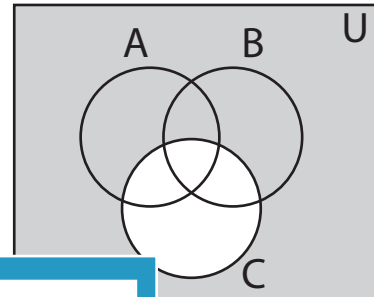
L2S2

Shade the given region.

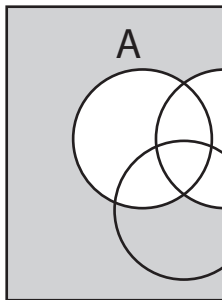
1) $C - A'$



2) C'



3) $A' - B$



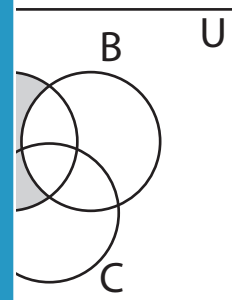
PREVIEW

Gain complete access to the largest collection of worksheets in all subjects!

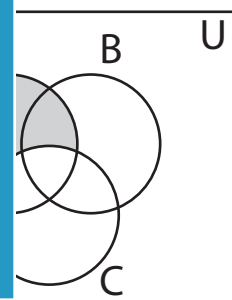
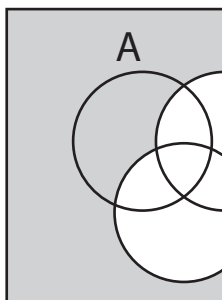
Members, please log in to download this worksheet.

Not a member? Please sign up to gain complete access.

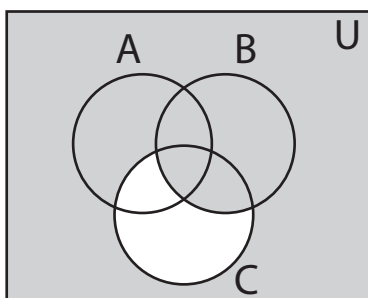
www.mathworksheets4kids.com



5) $B' \cap C'$



7) $(C - B)'$



8) $A \cup B'$

