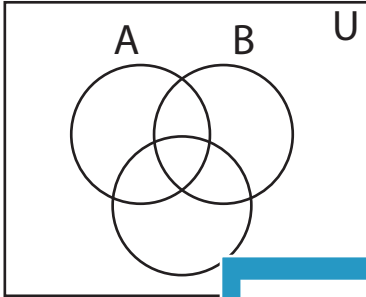


Shading - Venn Diagram

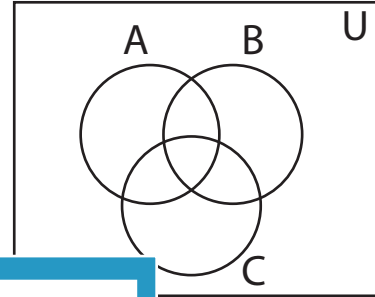
L2S4

Shade the given region.

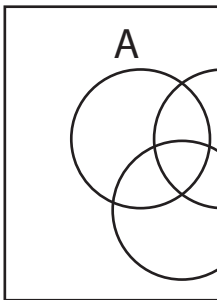
1) $A' \cup C$



2) $A' - C'$

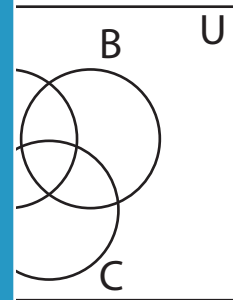


3) $(B - C)'$

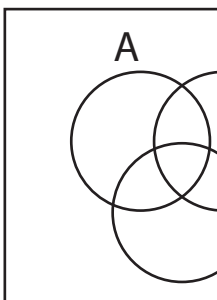


PREVIEW

Gain complete access to the largest
collection of worksheets in all subjects!



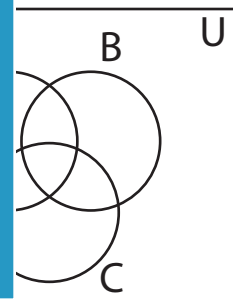
5) $A' - C$



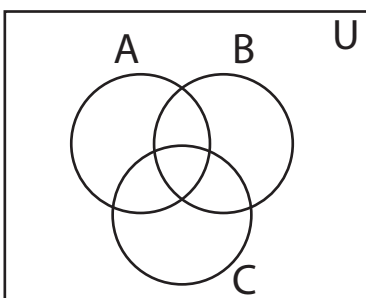
Members, please
log in to
download this
worksheet.

Not a member?
Please sign up to
gain complete
access.

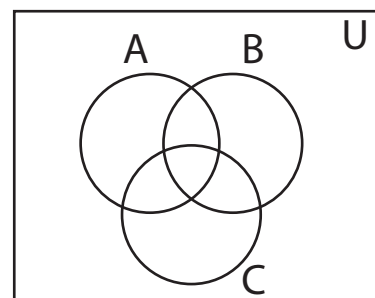
www.mathworksheets4kids.com



7) $B' - C'$



8) $C - B'$

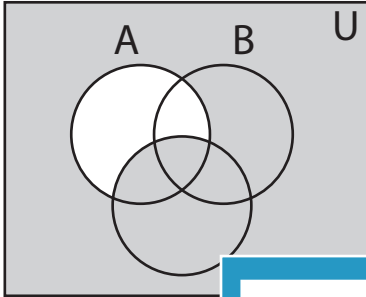


Answer key**Shading - Venn Diagram**

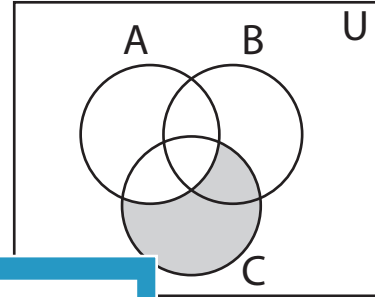
L2S4

Shade the given region.

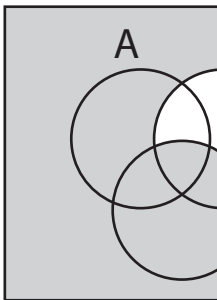
1) $A' \cup C$



2) $A' - C'$



3) $(B - C)'$



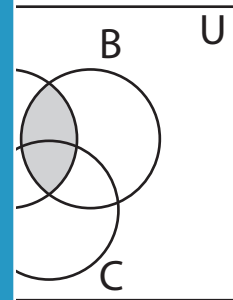
PREVIEW

Gain complete access to the largest collection of worksheets in all subjects!

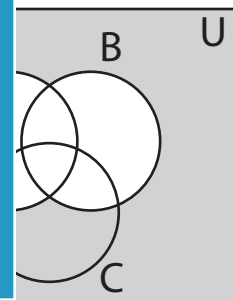
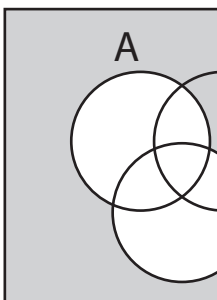
Members, please log in to download this worksheet.

Not a member? Please sign up to gain complete access.

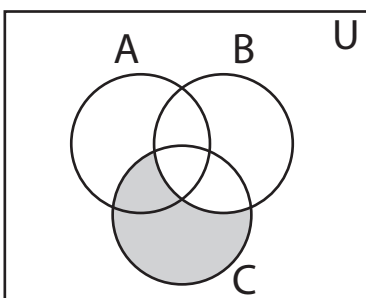
www.mathworksheets4kids.com



5) $A' - C$



7) $B' - C'$



8) $C - B'$

