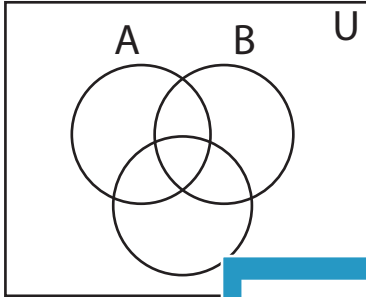


Shading - Venn Diagram

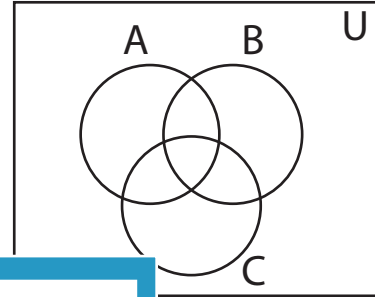
L2S5

Shade the given region.

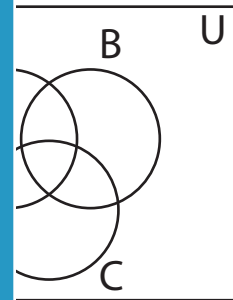
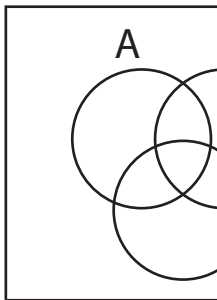
1) $(C' - A)'$



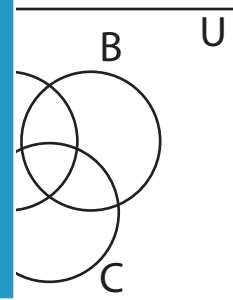
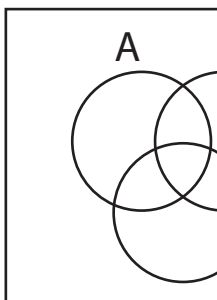
2) B'



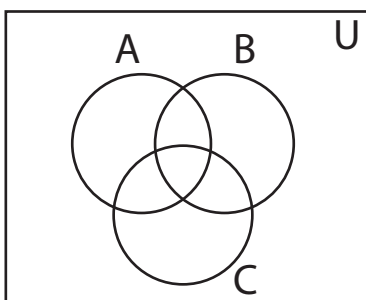
3) $(A - C)'$



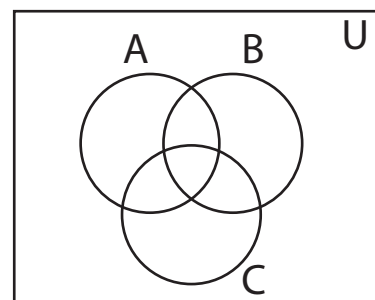
5) $A \cap B'$



7) $C' - A$



8) $(B \cap C)'$



PREVIEW

Gain complete access to the largest
collection of worksheets in all subjects!

Members, please
log in to
download this
worksheet.

Not a member?
Please sign up to
gain complete
access.

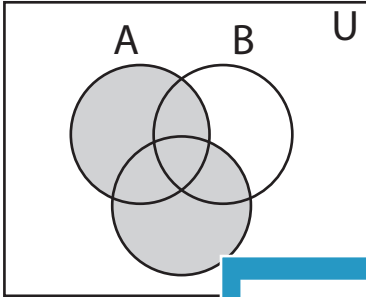
www.mathworksheets4kids.com

Answer key**Shading - Venn Diagram**

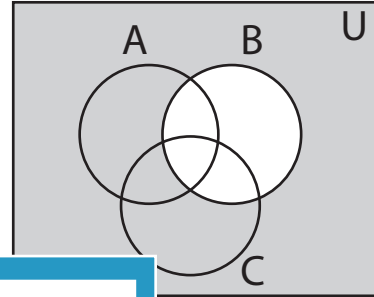
L2S5

Shade the given region.

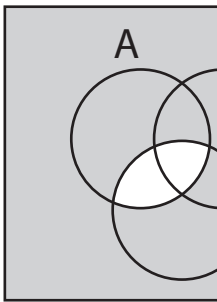
1) $(C' - A)'$



2) B'



3) $(A - C)'$



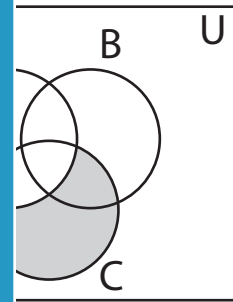
PREVIEW

Gain complete access to the largest collection of worksheets in all subjects!

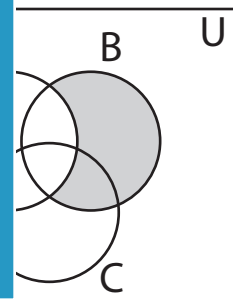
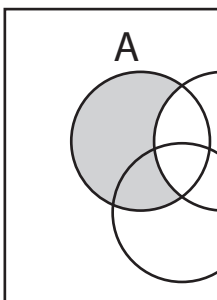
Members, please log in to download this worksheet.

Not a member? Please sign up to gain complete access.

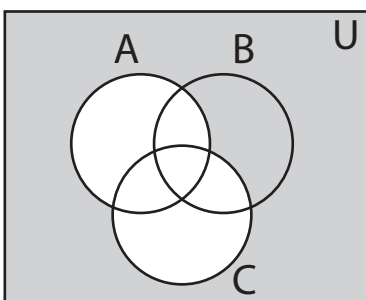
www.mathworksheets4kids.com



5) $A \cap B'$



7) $C' - A$



8) $(B \cap C)'$

