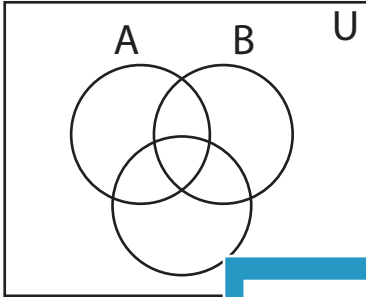


Shading - Venn Diagram

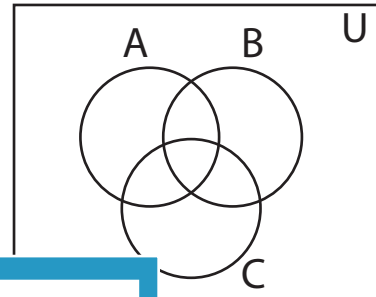
L3S2

Shade the given region.

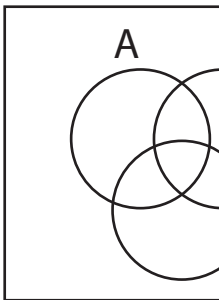
1) $(A - B) - (B \cup C')$



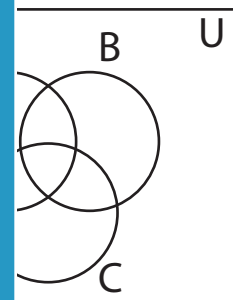
2) $(B - C)' - A'$



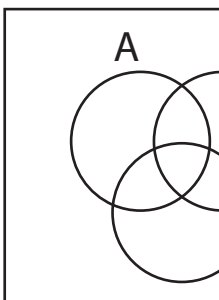
3) $(A \cup B') - (A' \cap B)$



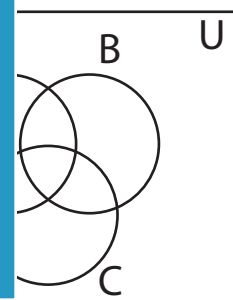
4) $(A \cap B) - C$



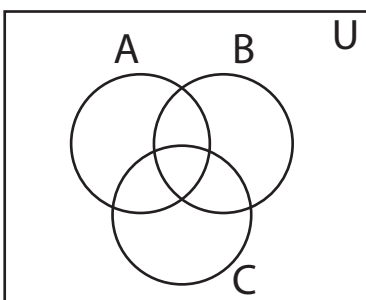
5) $(B' - A') \cup (A \cap B)$



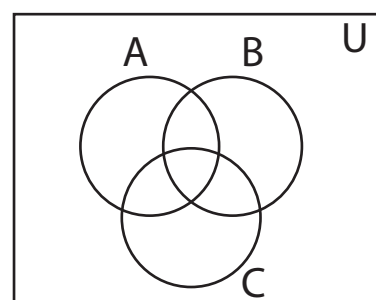
6) $(A \cap B) - C$



7) $(B' \cap C)' - A$



8) $A' \cap (B' \cap C')$



PREVIEW

Gain complete access to the largest
collection of worksheets in all subjects!

Members, please
log in to
download this
worksheet.

Not a member?
Please sign up to
gain complete
access.

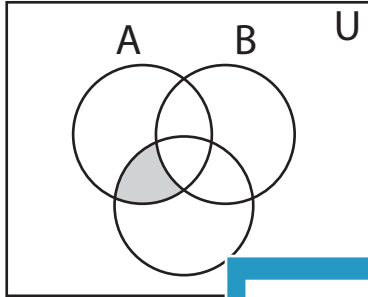
www.mathworksheets4kids.com

Answer key**Shading - Venn Diagram**

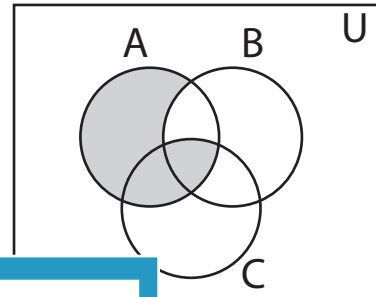
L3S2

Shade the given region.

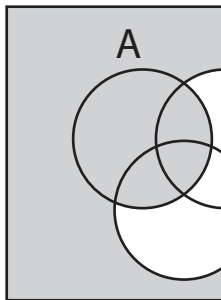
1) $(A - B) - (B \cup C')$



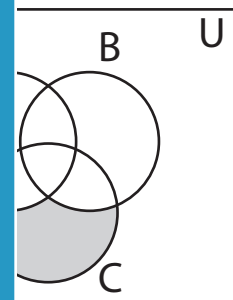
2) $(B - C)' - A'$



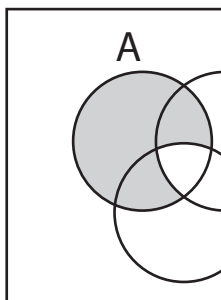
3) $(A \cup B') - (A' \cap B)$



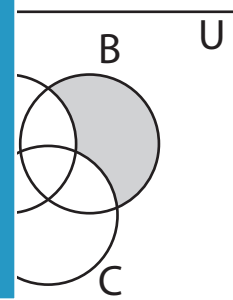
$(A' \cap B)$



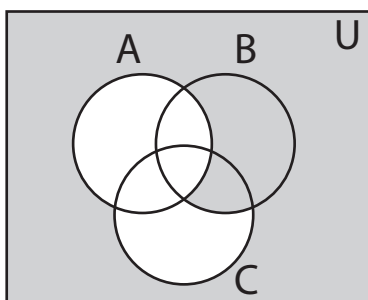
5) $(B' - A') \cup (A \cap B)$



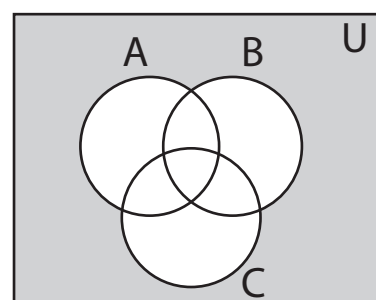
$(A \cap B)$



7) $(B' \cap C)' - A$



8) $A' \cap (B' \cap C')$

**PREVIEW**

Gain complete access to the largest collection of worksheets in all subjects!

Members, please log in to download this worksheet.

Not a member? Please sign up to gain complete access.

www.mathworksheets4kids.com