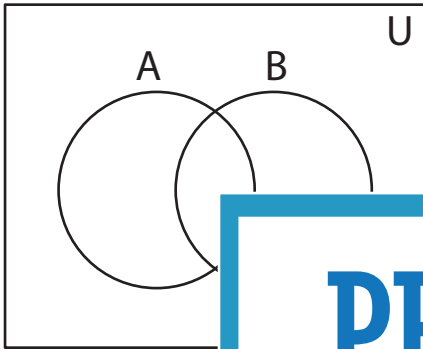


Shading - Venn Diagram

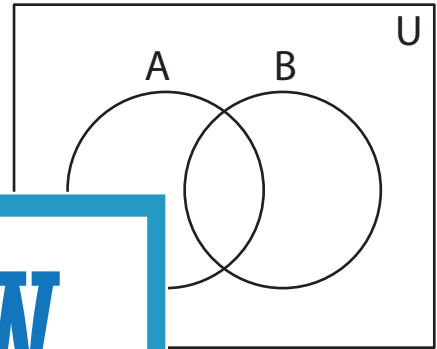
L1S4

Shade the given region.

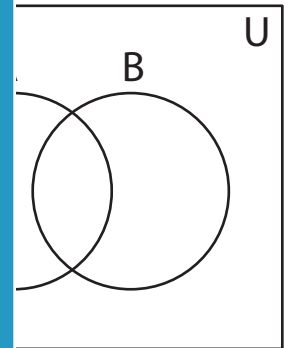
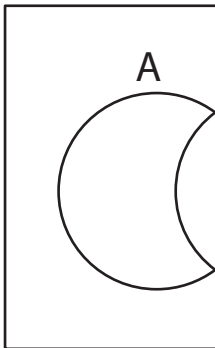
1) $(A \cap A)'$



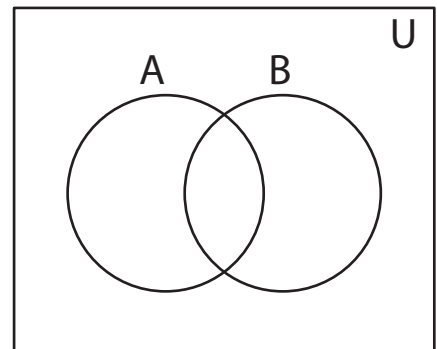
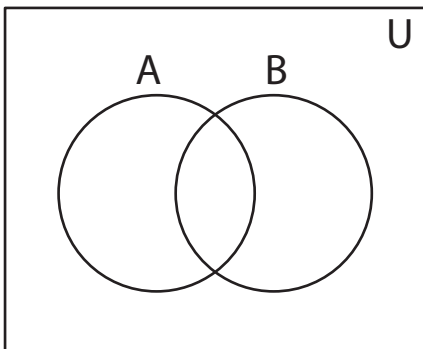
2) $(A \cup B)'$



3) $A' \cup B$



5) $(A')' \cap B$



PREVIEW

Gain complete access to the largest
collection of worksheets in all subjects!

Members, please
log in to
download this
worksheet.

Not a member?
Please sign up to
gain complete
access.

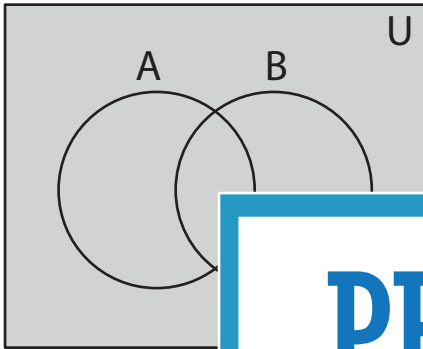
www.mathworksheets4kids.com

Answer key**Shading - Venn Diagram**

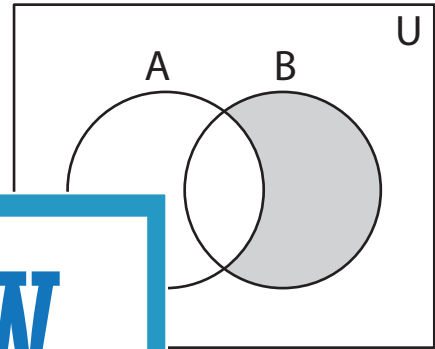
L154

Shade the given region.

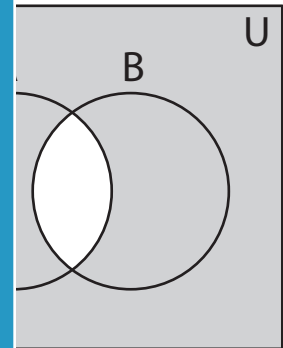
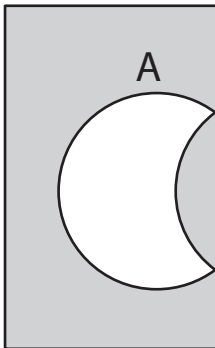
1) $(A \cap A)'$



2) $(A \cup B)'$



3) $A' \cup B$

**PREVIEW**

Gain complete access to the largest collection of worksheets in all subjects!

Members, please log in to download this worksheet.

Not a member? Please sign up to gain complete access.

www.mathworksheets4kids.com

5) $(A') \cap B$

