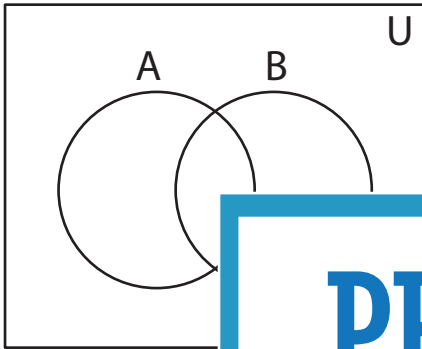


## Shading - Venn Diagram

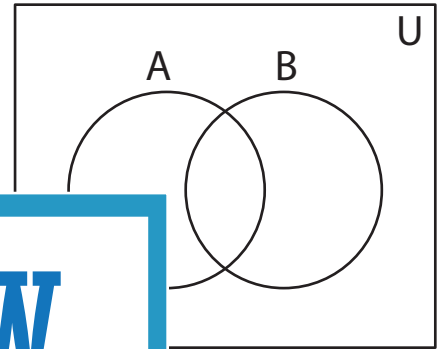
L2S1

Shade the given region.

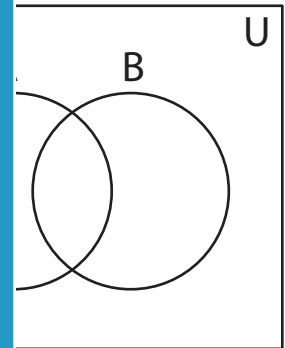
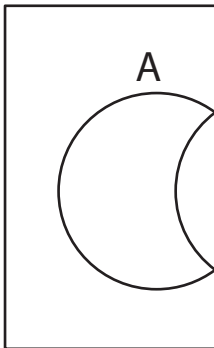
1)  $B - A$



2)  $(A' - B)'$



3)  $A' \cap B'$



# PREVIEW

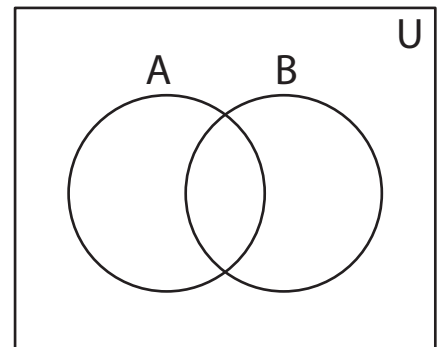
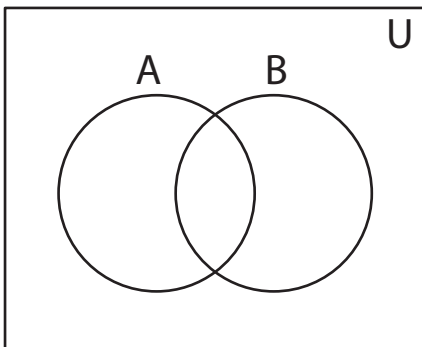
Gain complete access to the largest  
collection of worksheets in all subjects!

Members, please  
log in to  
download this  
worksheet.

Not a member?  
Please sign up to  
gain complete  
access.

[www.mathworksheets4kids.com](http://www.mathworksheets4kids.com)

5)  $(A - B)'$

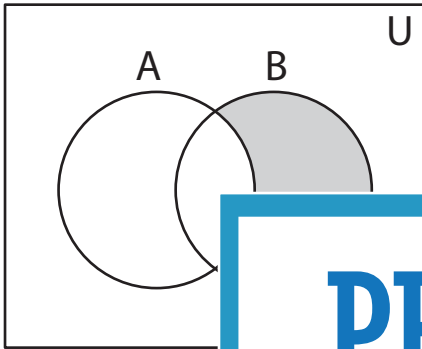


**Answer key****Shading - Venn Diagram**

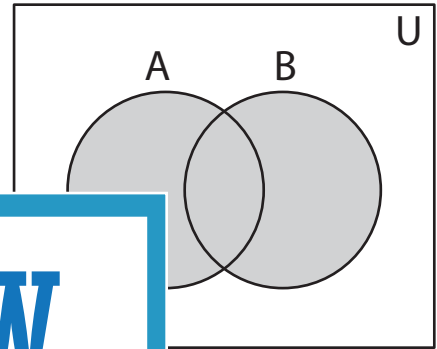
L2S1

Shade the given region.

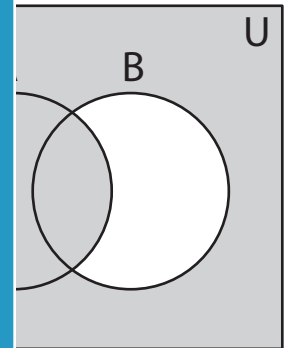
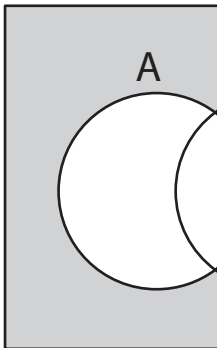
1)  $B - A$



2)  $(A' - B)'$



3)  $A' \cap B'$

**PREVIEW**

Gain complete access to the largest collection of worksheets in all subjects!

Members, please log in to download this worksheet.

Not a member? Please sign up to gain complete access.

[www.mathworksheets4kids.com](http://www.mathworksheets4kids.com)

5)  $(A - B)'$

