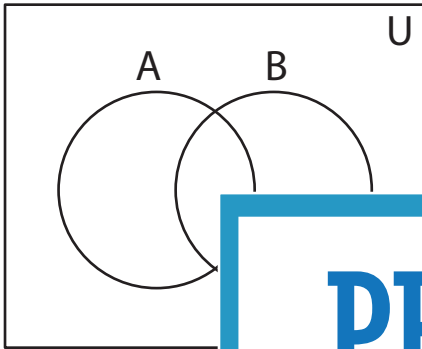


## Shading - Venn Diagram

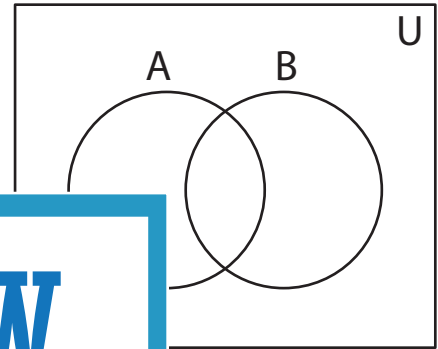
L2S3

Shade the given region.

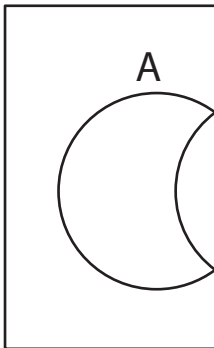
1)  $A \cup B$



2)  $B' - A$



3)  $A' \cap B$



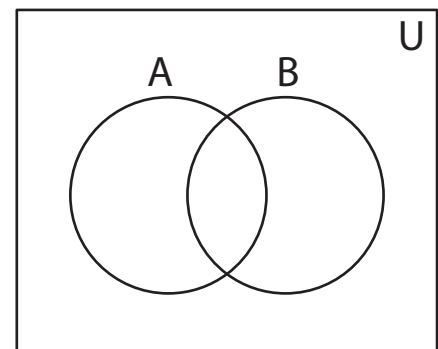
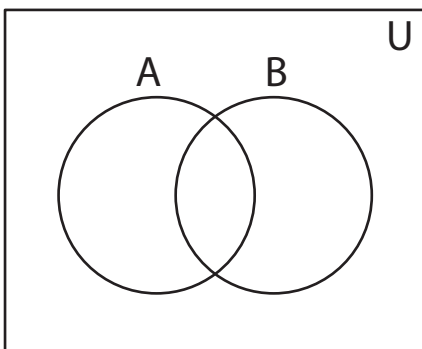
Gain complete access to the largest  
collection of worksheets in all subjects!

Members, please  
log in to  
download this  
worksheet.

Not a member?  
Please sign up to  
gain complete  
access.

[www.mathworksheets4kids.com](http://www.mathworksheets4kids.com)

5)  $A - B'$

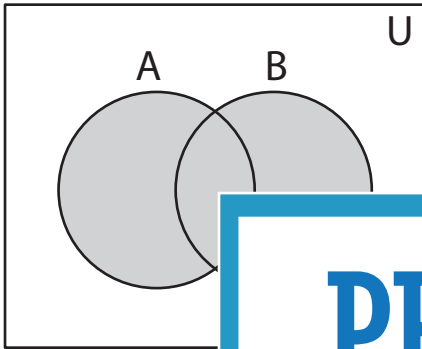


**Answer key****Shading - Venn Diagram**

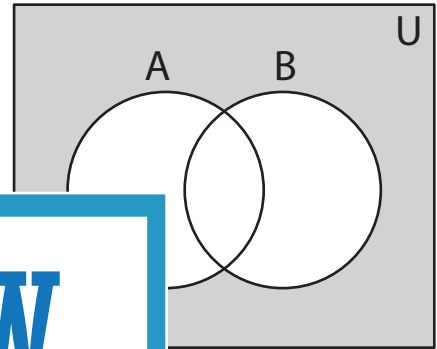
L2S3

Shade the given region.

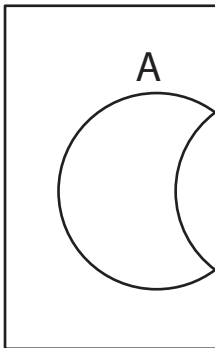
1)  $A \cup B$



2)  $B' - A$



3)  $A' \cap B$



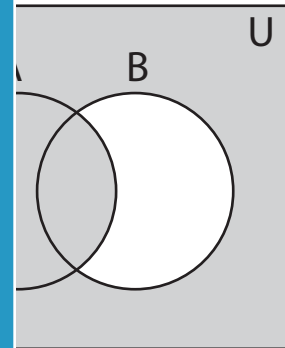
**PREVIEW**

Gain complete access to the largest collection of worksheets in all subjects!

Members, please log in to download this worksheet.

Not a member? Please sign up to gain complete access.

[www.mathworksheets4kids.com](http://www.mathworksheets4kids.com)



5)  $A - B'$

