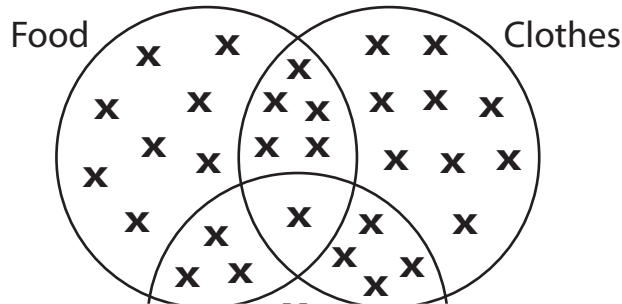


Reading Venn Diagram

Read each Venn diagram and answer the questions that follow.

- 1) The Venn diagram below represents the number of corporate companies which made donations in the form of food, clothing, and money to help the victims of Hurricane Victoria.



PREVIEW

Gain complete access to the largest collection of worksheets in all subjects!

Members, please log in to download this worksheet.


Not a member? Please sign up to gain complete access.

www.mathworksheets4kids.com

- a) How many companies donated to humanitarian causes?

- b) Find the number of companies that donated to food or clothing items.

- 2) The eating preferences of employees are shown in the Venn diagram below.



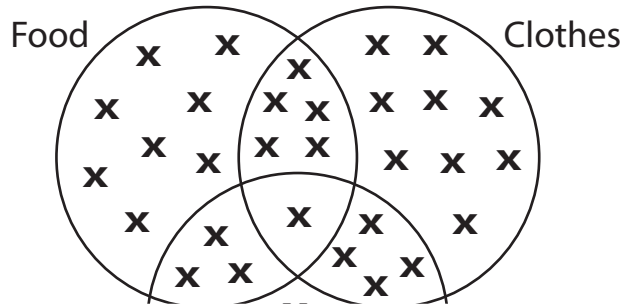
- a) List down the number of employees who prefer to eat only burgers.

- b) How many employees prefer pastas and salads over burgers?

Reading Venn Diagram

Read each Venn diagram and answer the questions that follow.

- 1) The Venn diagram below represents the number of corporate companies which made donations in the form of food, clothing, and money to help the victims of Hurricane Victoria.



PREVIEW

Gain complete access to the largest collection of worksheets in all subjects!

Members, please log in to download this worksheet.

Not a member? Please sign up to gain complete access.


www.mathworksheets4kids.com

- a) How many companies donated to humanitarian cause?
- b) Find the number of companies that donated to food or clothing items.
- 2) The eating preferences of employees are shown in the Venn diagram below.

17 companies

30 companies

the Venn diagram below.



- a) List down the number of employees who prefer to eat only burgers.
- b) How many employees prefer pastas and salads over burgers?

10 employees

22 employees
