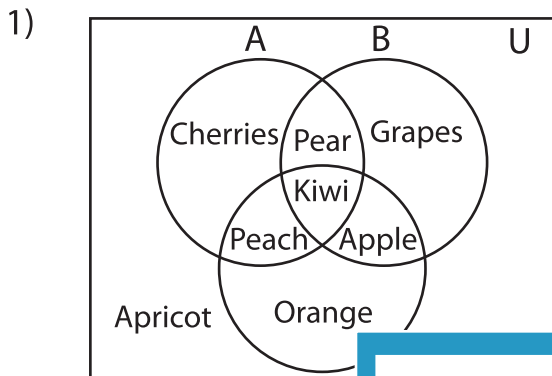


**Venn Diagram**

L1S5

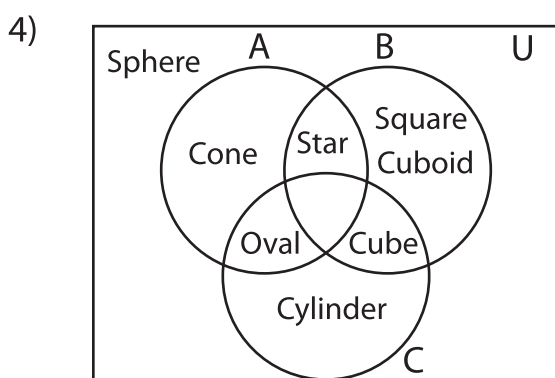
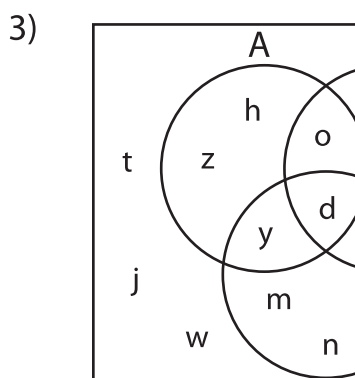
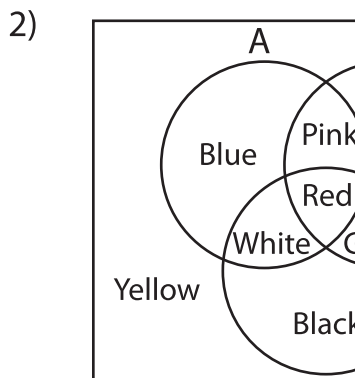
Perform the below mention boolean algebraic operation for the given set of elements.



i)  $(A \cup C)'$  = \_\_\_\_\_

ii)  $B' \cap C$  = \_\_\_\_\_

iii)  $(A' \cup B')'$  = \_\_\_\_\_



i)  $A'$  = \_\_\_\_\_

ii)  $A \cup B'$  = \_\_\_\_\_

iii)  $B \cap C$  = \_\_\_\_\_

**PREVIEW**

Gain complete access to the largest collection of worksheets in all subjects!

Members, please log in to download this worksheet.

Not a member? Please sign up to gain complete access.

[www.mathworksheets4kids.com](http://www.mathworksheets4kids.com)

---

---

---

---

---

---

---

---