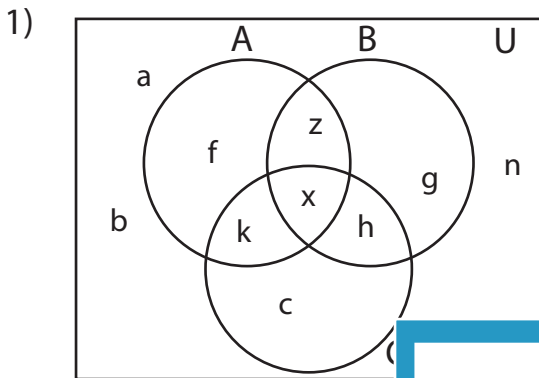


Venn Diagram

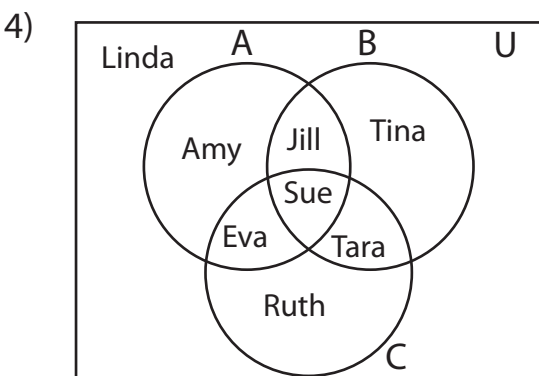
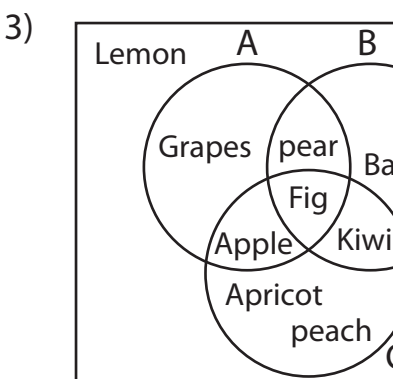
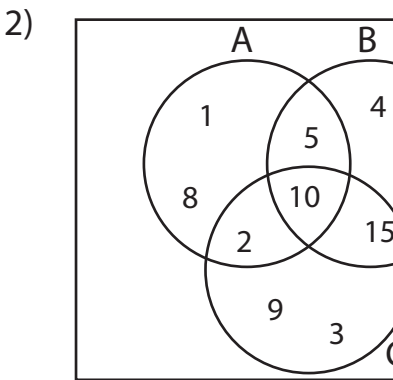
L3S1

Perform the below mention boolean algebraic operation for the given set of elements.



i) $(B \cup C)' - A' =$ _____

ii) $(A \cup B) \cup (A' - B) =$ _____



i) $(A' \cup C') \cap (B - C) =$ _____

ii) $(B \cap C) - A' =$ _____

iii) $(A \cap B)' \cup (A \cup C) =$ _____

PREVIEW

Gain complete access to the largest collection of worksheets in all subjects!

Members, please log in to download this worksheet.

Not a member? Please sign up to gain complete access.

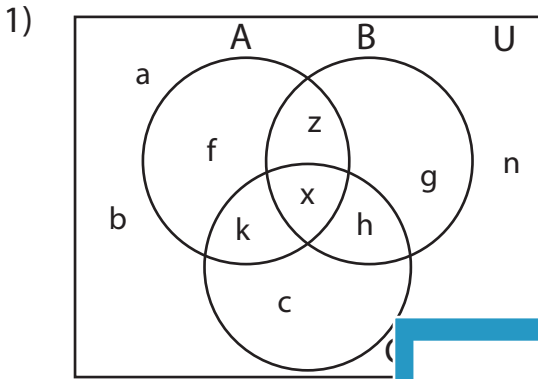
www.mathworksheets4kids.com

Answer key

Venn Diagram

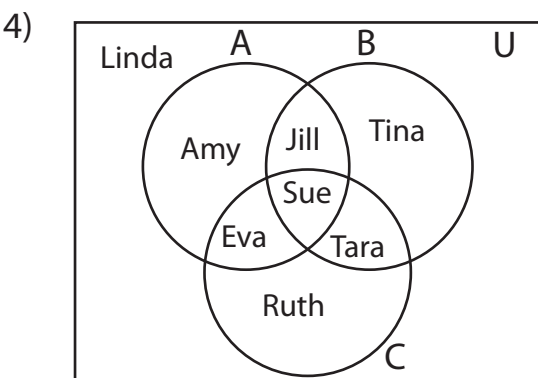
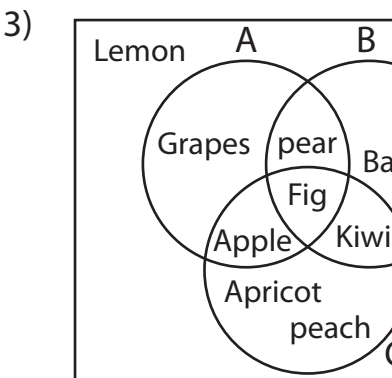
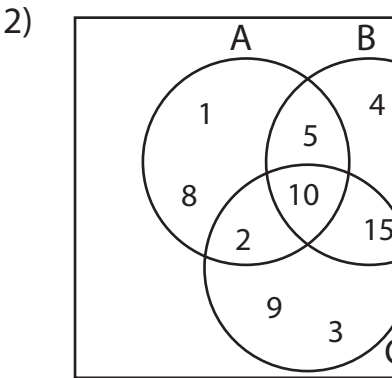
L3S1

Perform the below mention boolean algebraic operation for the given set of elements.



i) $(B \cup C)' - A' = \{f\}$

ii) $(A \cup B) \cup (A' - B) = \{a, b, c, f, g, h, k, n, x, z\}$



i) $(A' \cup C') \cap (B - C) = \{Tara\}$

ii) $(B \cap C) - A' = \{Sue\}$

iii) $(A \cap B)' \cup (A \cup C) = \{Amy, Eva, Jill, Linda, Ruth, Sue, Tara, Tina\}$

PREVIEW

Gain complete access to the largest collection of worksheets in all subjects!

Members, please log in to download this worksheet.

Not a member? Please sign up to gain complete access.

www.mathworksheets4kids.com

), 11, 15}

, 12}

a, Cherry, Fig, Lemon}

ar}

ry, Fig, Kiwi, Lemon, Pear}