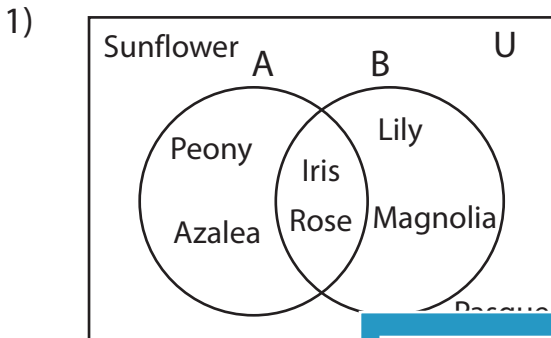


## Venn Diagram

L2S2

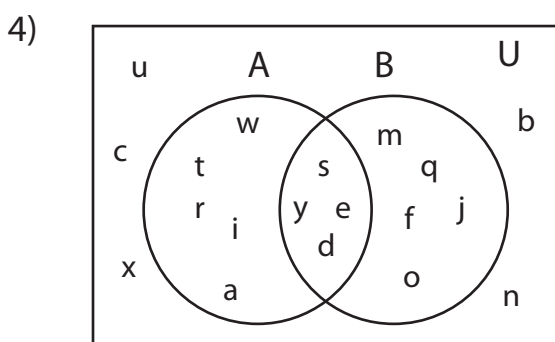
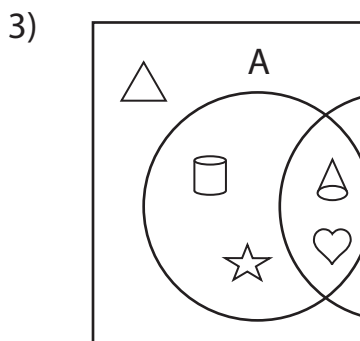
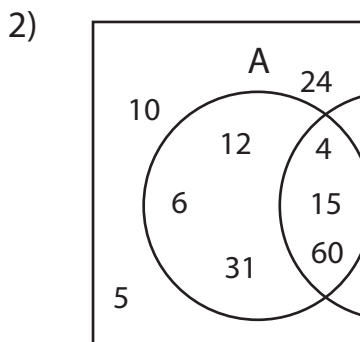
Perform the below mention boolean algebraic operation for the given set of elements.



i)  $(A \cup B)'$  = \_\_\_\_\_

ii)  $B - A'$  = \_\_\_\_\_

iii)  $B - A$  = \_\_\_\_\_



i)  $A - B$  = \_\_\_\_\_

ii)  $A' \cap B$  = \_\_\_\_\_

iii)  $B'$  = \_\_\_\_\_

# PREVIEW

Gain complete access to the largest collection of worksheets in all subjects!

Members, please log in to download this worksheet.

Not a member? Please sign up to gain complete access.

www.mathworksheets4kids.com

---

---

---

---

---

---

---

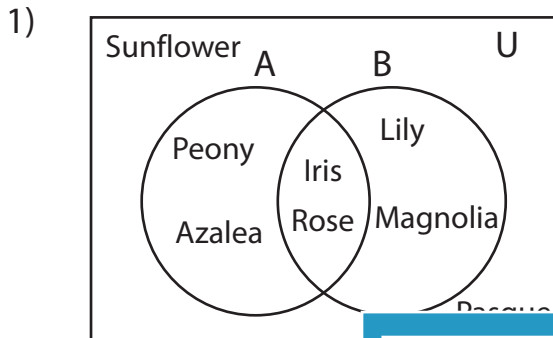
---

**Answer key**

**Venn Diagram**

L2S2

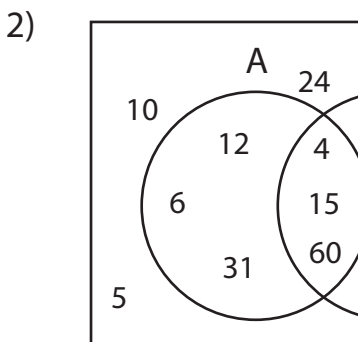
Perform the below mention boolean algebraic operation for the given set of elements.



i)  $(A \cup B)'$  = {Sunflower, Pasque}

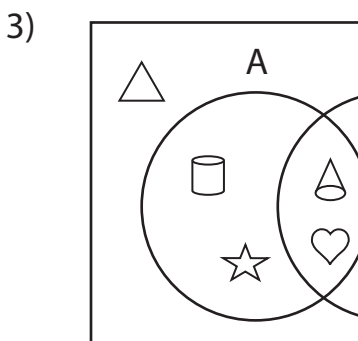
ii)  $B - A'$  = {Iris, Rose}

iii)  $B - A$  = {Lily, Magnolia}



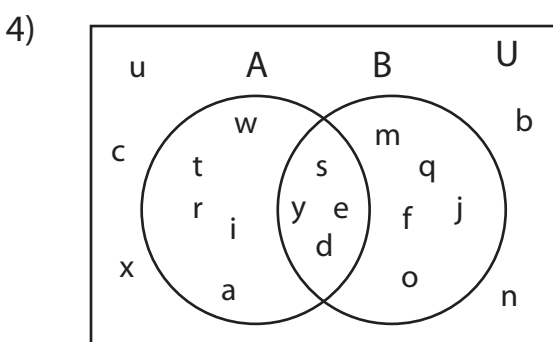
{12, 15, 16, 24, 31, 60}

{12, 16, 19, 24, 31, 42}



{△, □, △}

{△}



i)  $A - B$  = {a, i, r, t, w}

ii)  $A' \cap B$  = {f, j, m, o, q}

iii)  $B'$  = {a, b, c, i, n, r, t, u, w, x}

**PREVIEW**

Gain complete access to the largest collection of worksheets in all subjects!

Members, please log in to download this worksheet.

Not a member? Please sign up to gain complete access.

[www.mathworksheets4kids.com](http://www.mathworksheets4kids.com)