


Name : _____

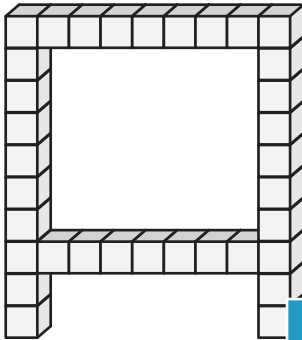
Counting Cubes - Solid Blocks

ES2

Count the unit cubes and find the volume of each solid block.

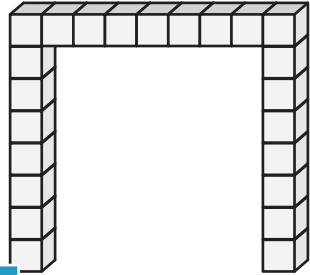
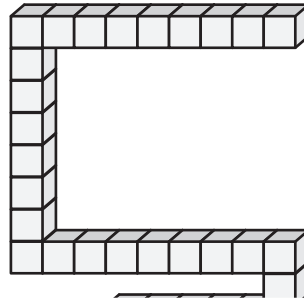
 = 1 yd³

1)



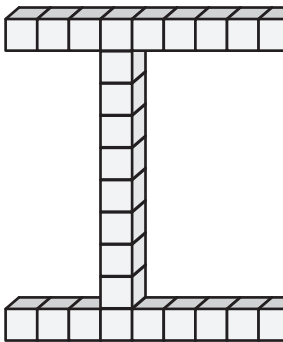
Volume = _____

2)



Volume = _____

4)



Volume = _____

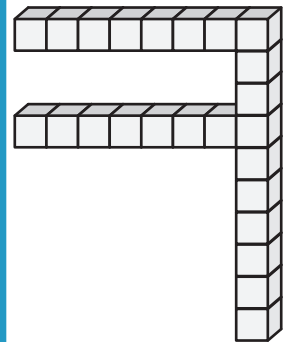
PREVIEW

Gain complete access to the largest collection of worksheets in all subjects!

Members, please log in to download this worksheet.

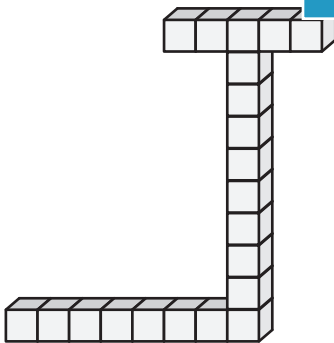
Not a member? Please sign up to gain complete access.

www.mathworksheets4kids.com

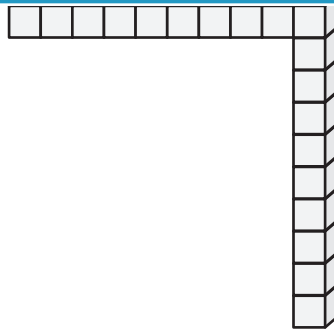


Volume = _____


7)



Volume = _____



Volume = _____



Volume = _____


Name : _____

Answer key

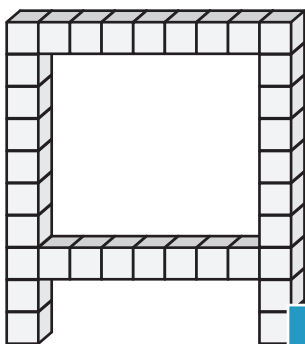
ES2

Counting Cubes - Solid Blocks

Count the unit cubes and find the volume of each solid block.

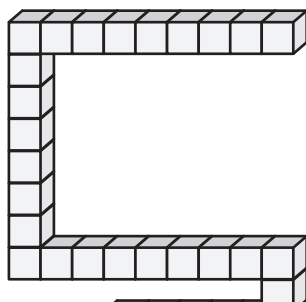
 = 1 yd³

1)

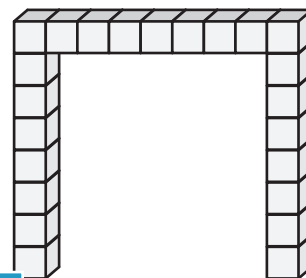


Volume = 34 yd³

2)

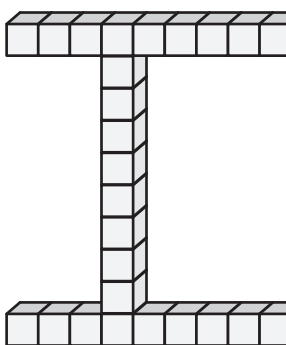


3)



Volume = 23 yd³

4)



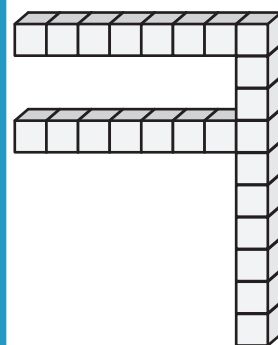
Volume = 26 yd³

Gain complete access to the largest collection of worksheets in all subjects!

Members, please log in to download this worksheet.

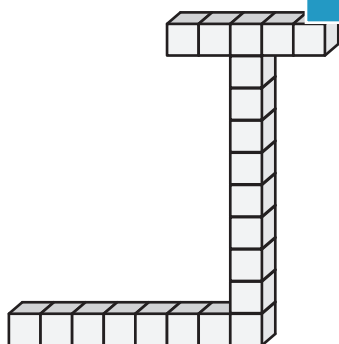
Not a member? Please sign up to gain complete access.

www.mathworksheets4kids.com

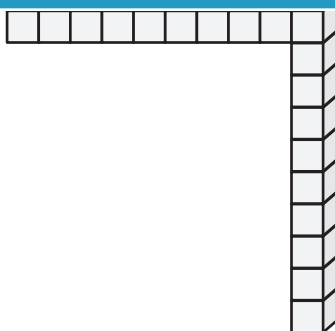


Volume = 24 yd³

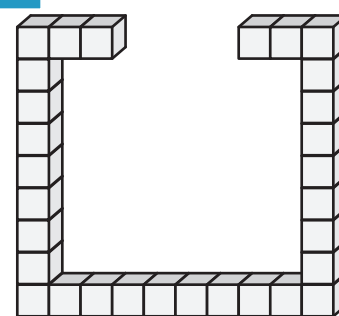
7)



Volume = 21 yd³



Volume = 19 yd³



Volume = 30 yd³