


Name : _____

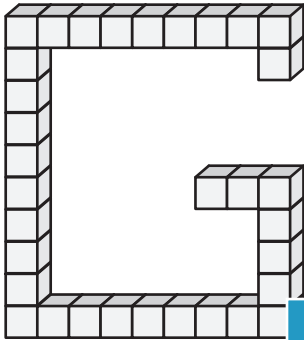
Counting Cubes - Solid Blocks

ES3

Count the unit cubes and find the volume of each solid block.

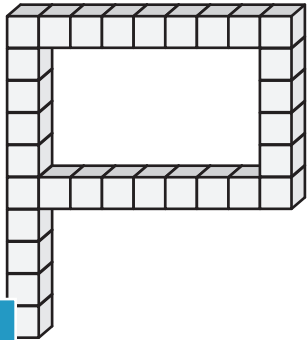
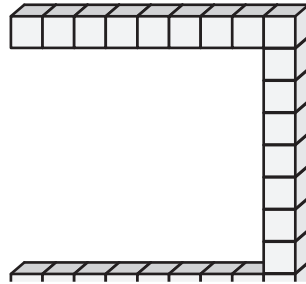
 = 1 ft³

1)



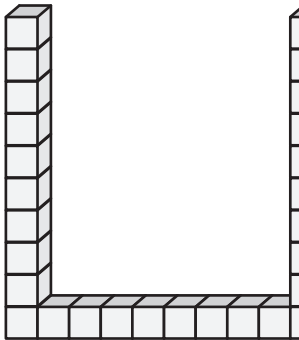
Volume = _____

2)



Volume = _____

4)



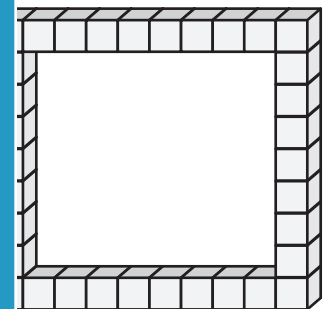
Volume = _____

Gain complete access to the largest collection of worksheets in all subjects!

Members, please log in to download this worksheet.

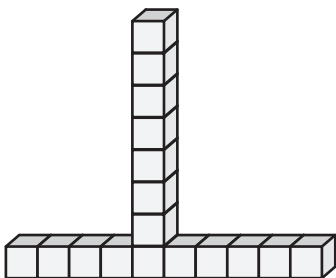
Not a member? Please sign up to gain complete access.

www.mathworksheets4kids.com

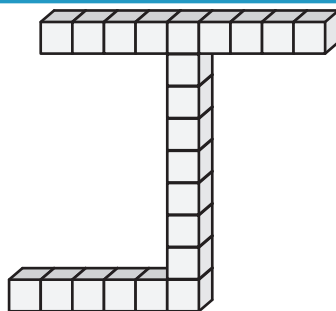


Volume = _____

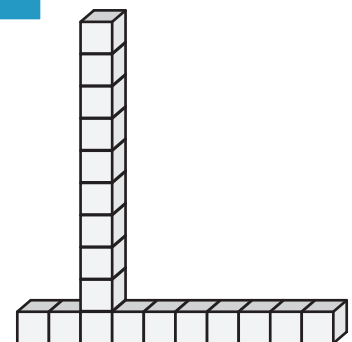
7)



Volume = _____



Volume = _____



Volume = _____

Name : _____

Answer key

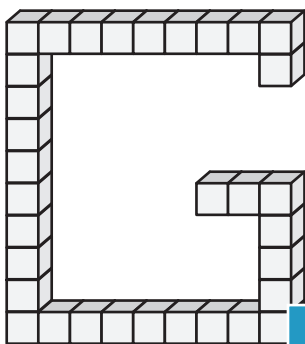
ES3

Counting Cubes - Solid Blocks

Count the unit cubes and find the volume of each solid block.

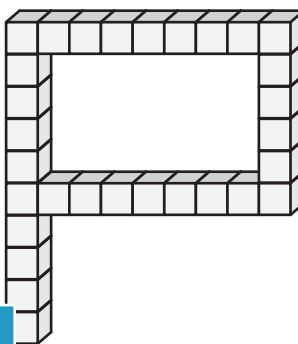
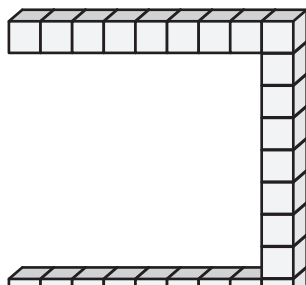
 = 1 ft³

1)



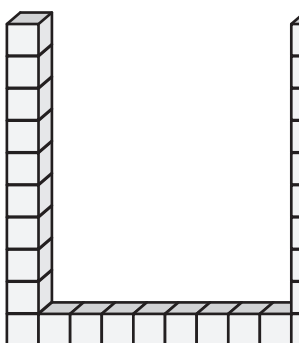
Volume = 33 ft³

2)



Volume = 30 ft³

4)



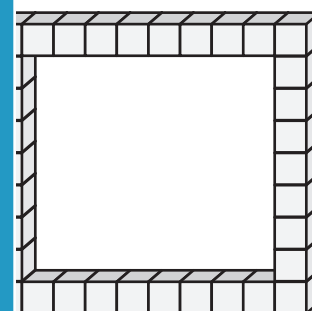
Volume = 28 ft³

Gain complete access to the largest collection of worksheets in all subjects!

Members, please log in to download this worksheet.


Not a member? Please sign up to gain complete access.

www.mathworksheets4kids.com

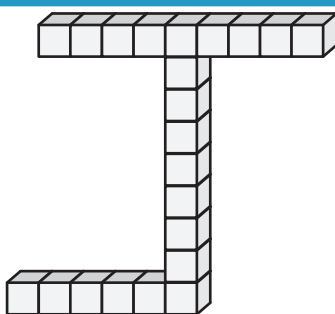


Volume = 34 ft³

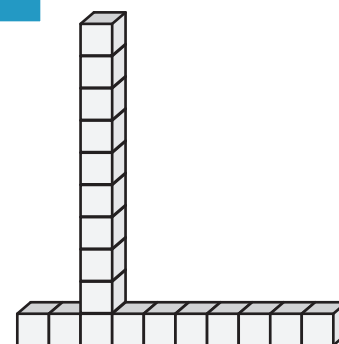
7)



Volume = 17 ft³



Volume = 22 ft³



Volume = 19 ft³