


Name : _____

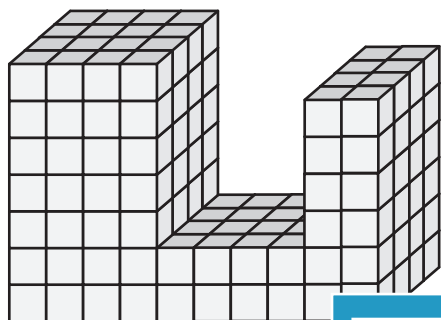
Counting Cubes - Solid Blocks

MS1

Count the unit cubes and find the volume of each solid block.

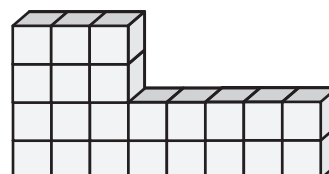
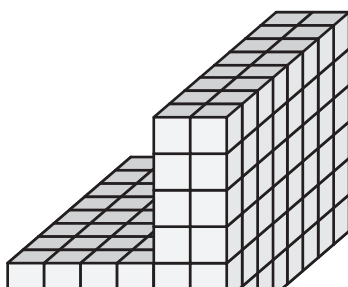
 = 1 yd^3

1)



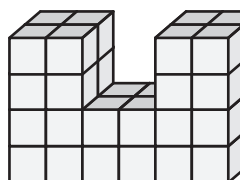
Volume = _____

2)



Volume = _____

4)




Volume = _____

PREVIEW
Gain complete access to the largest collection of worksheets in all subjects!

Members, please log in to download this worksheet.


Not a member? Please sign up to gain complete access.

www.mathworksheets4kids.com




Volume = _____

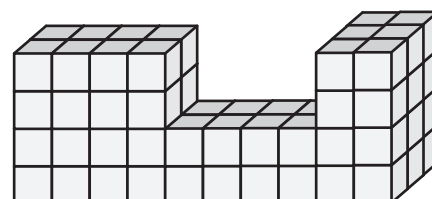
7)



Volume = _____



Volume = _____



Volume = _____


Name : _____

Answer key

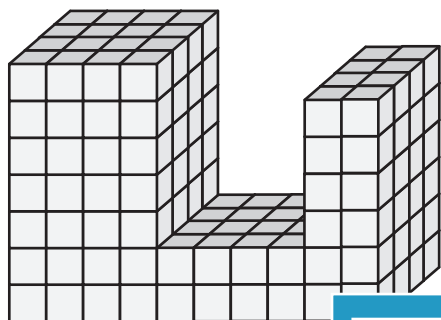
MS1

Counting Cubes - Solid Blocks

Count the unit cubes and find the volume of each solid block.

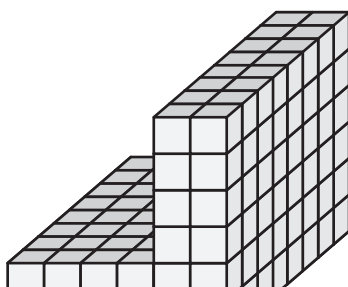
 = 1 yd³

1)



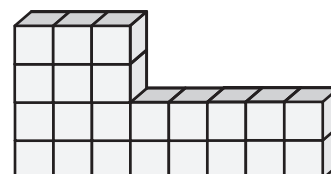
Volume = 192 yd³

2)



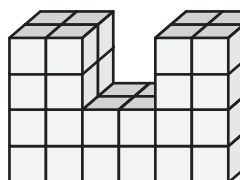
Volume = 192 yd³

3)



Volume = 22 yd³

4)




Volume = 40 yd³

Gain complete access to the largest collection of worksheets in all subjects!

Members, please log in to download this worksheet.


Not a member? Please sign up to gain complete access.

www.mathworksheets4kids.com

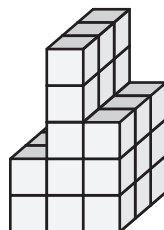


Volume = 104 yd³

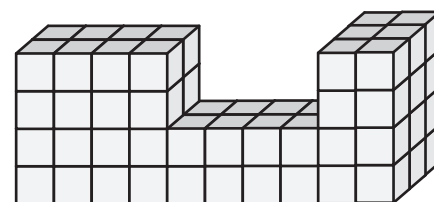
7)



Volume = 81 yd³



Volume = 30 yd³



Volume = 72 yd³