


Name : _____


Counting Cubes - Solid Blocks

MS2

Count the unit cubes and find the volume of each solid block.

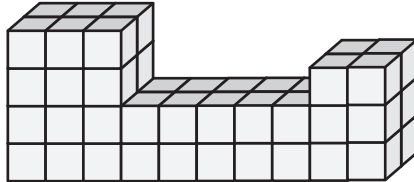
 = 1 ft³

1)



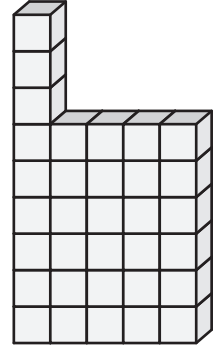
Volume = _____

2)




Volume = _____

3)



4)



Volume = _____

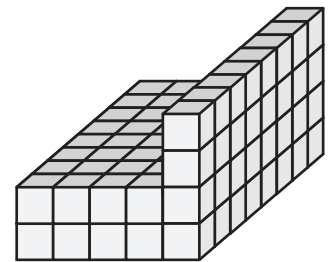
PREVIEW

Gain complete access to the largest collection of worksheets in all subjects!

Members, please log in to download this worksheet.


Not a member? Please sign up to gain complete access.

www.mathworksheets4kids.com

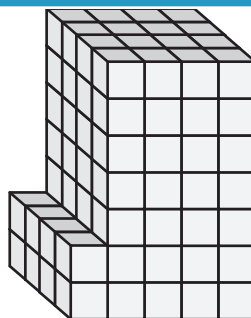


Volume = _____


7)



Volume = _____



Volume = _____



Volume = _____

Name : _____

Answer key


MS2

Counting Cubes - Solid Blocks

Count the unit cubes and find the volume of each solid block.

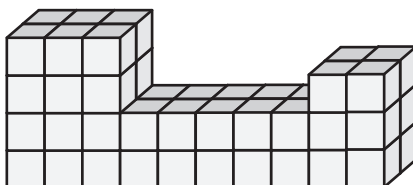
 = 1 ft³

1)



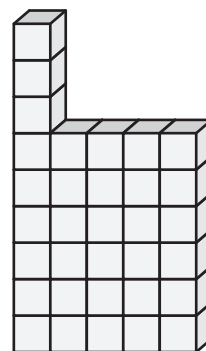
Volume = 64 ft³

2)




Volume = 33 ft³

3)



4)



Volume = 84 ft³

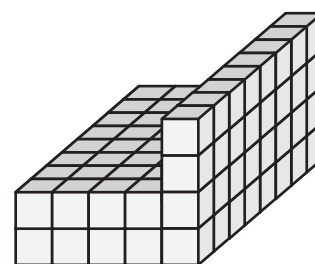
PREVIEW

Gain complete access to the largest collection of worksheets in all subjects!

Members, please log in to download this worksheet.


Not a member? Please sign up to gain complete access.

www.mathworksheets4kids.com

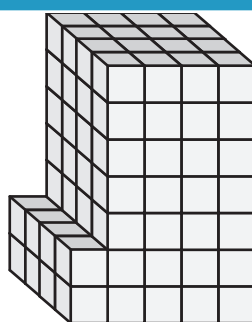


Volume = 96 ft³


7)



Volume = 208 ft³



Volume = 120 ft³



Volume = 32 ft³