


Name : _____

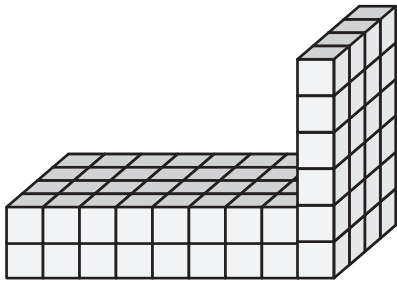
Counting Cubes - Solid Blocks

MS3

Count the unit cubes and find the volume of each solid block.


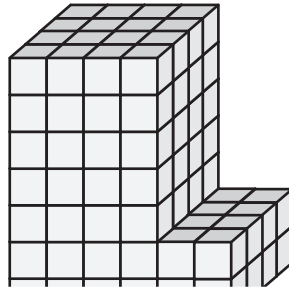
 = 1 in³

1)



Volume = _____

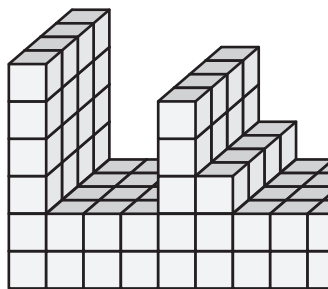
2)



3)

Volume = _____

4)



Volume = _____

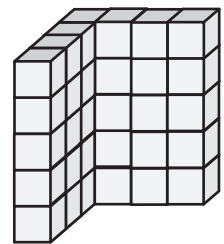
PREVIEW

Gain complete access to the largest collection of worksheets in all subjects!

Members, please log in to download this worksheet.


Not a member? Please sign up to gain complete access.

www.mathworksheets4kids.com




Volume = _____

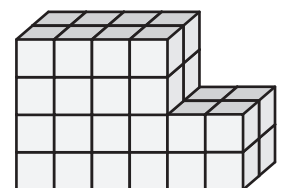
7)



Volume = _____



Volume = _____



Volume = _____


Name : _____

Answer key

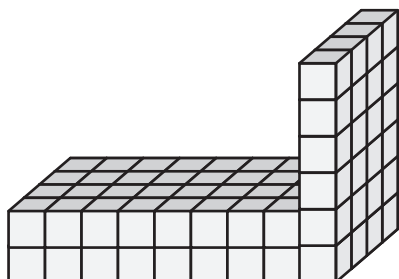
MS3

Counting Cubes - Solid Blocks

Count the unit cubes and find the volume of each solid block.


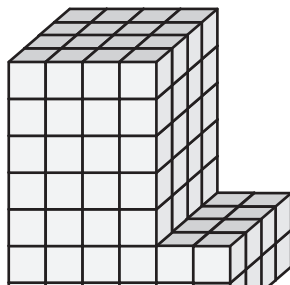
 = 1 in³

1)



Volume = 88 in³


2)



3)

Volume = 54 in³

4)



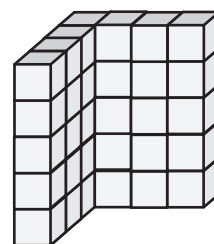
Volume = 132 in³

Gain complete access to the largest collection of worksheets in all subjects!

Members, please log in to download this worksheet.

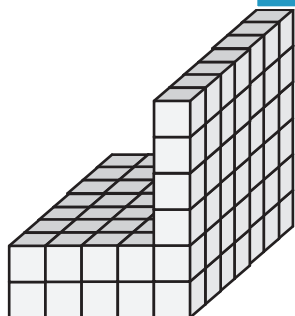
Not a member? Please sign up to gain complete access.

www.mathworksheets4kids.com




Volume = 35 in³

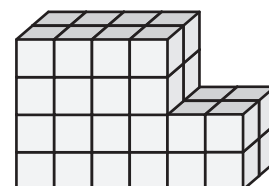
7)



Volume = 98 in³



Volume = 36 in³



Volume = 40 in³