
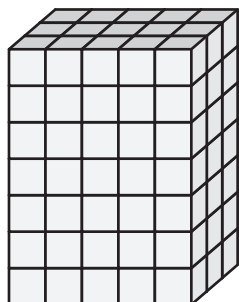



Counting Cubes - Rectangular Prisms


Count the cubes and find the volume of each rectangular prism.

1)  = 1 ft³



Volume = _____

2)  = 5 yd³




PREVIEW

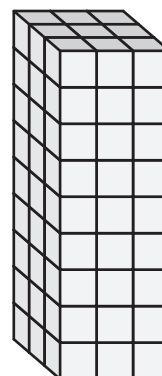
Gain complete access to the largest
collection of worksheets in all subjects!

Members, please
log in to
download this
worksheet.


Not a member?
Please sign up to
gain complete
access.

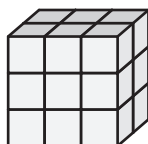
www.mathworksheets4kids.com

3)  = 2 in³




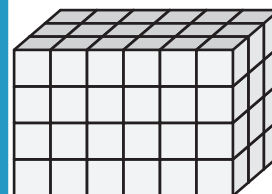
Volume = _____

4)  = 3 in³




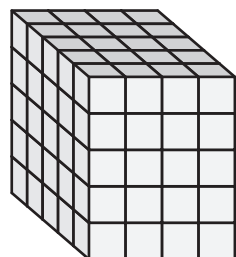
Volume = _____

 = 8 yd³



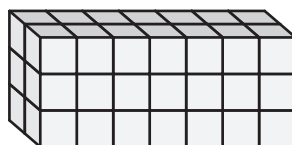
Volume = _____

7)  = 9 yd³

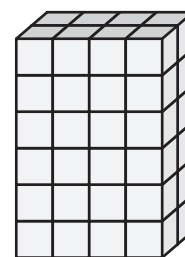


Volume = _____

 = 4 ft³



Volume = _____



Volume = _____