
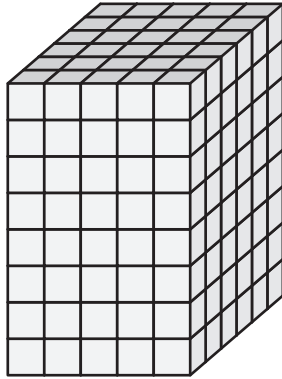


Name : \_\_\_\_\_


## Counting Cubes - Rectangular Prisms

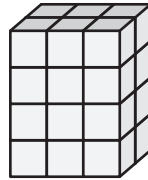
Count the cubes and find the volume of each rectangular prism.


1)  = 3 yd<sup>3</sup>

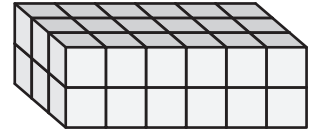


Volume = \_\_\_\_\_


2)  = 5 in<sup>3</sup>




3)  = 4 ft<sup>3</sup>





Volume = \_\_\_\_\_

4)  = 1 ft<sup>3</sup>




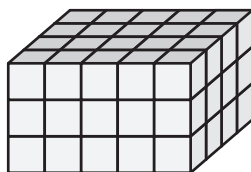
Volume = \_\_\_\_\_

 = 2 in<sup>3</sup>




Volume = \_\_\_\_\_

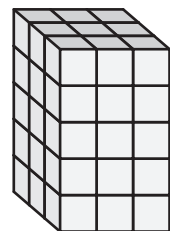
7)  = 7 in<sup>3</sup>



Volume = \_\_\_\_\_



Volume = \_\_\_\_\_



Volume = \_\_\_\_\_

**PREVIEW**

Gain complete access to the largest collection of worksheets in all subjects!

Members, please log in to download this worksheet.

Not a member? Please sign up to gain complete access.

[www.mathworksheets4kids.com](http://www.mathworksheets4kids.com)