

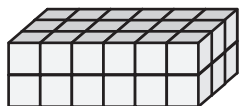
Name : \_\_\_\_\_

## Counting Cubes - Rectangular Prisms

ES2

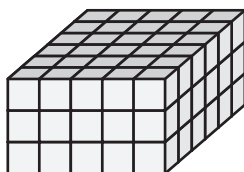
Count the unit cubes and find the volume of each rectangular prism.  = 1 in<sup>3</sup>

1)




Volume = \_\_\_\_\_

2)




Volume = \_\_\_\_\_

3)



4)



Volume = \_\_\_\_\_

**PREVIEW**  
Gain complete access to the largest collection of worksheets in all subjects!

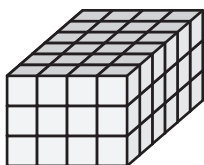
Members, please log in to download this worksheet.

Not a member? Please sign up to gain complete access.


[www.mathworksheets4kids.com](http://www.mathworksheets4kids.com)

Volume = \_\_\_\_\_


7)



Volume = \_\_\_\_\_



Volume = \_\_\_\_\_



Volume = \_\_\_\_\_