

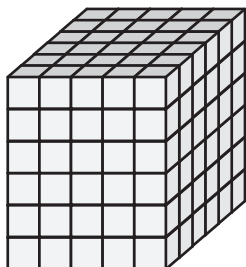
Name : _____

Counting Cubes - Rectangular Prisms

MS3

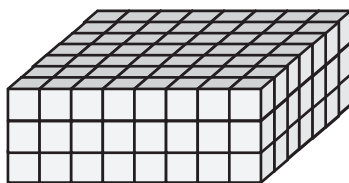
Count the unit cubes and find the volume of each rectangular prism.  = 1 yd³

1)



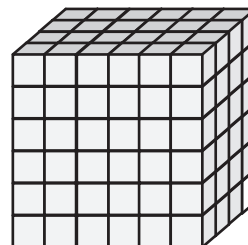
Volume = _____

2)




Volume = _____

3)



4)




Volume = _____

PREVIEW
Gain complete access to the largest
collection of worksheets in all subjects!

Members, please
log in to
download this
worksheet.


Not a member?
Please sign up to
gain complete
access.

www.mathworksheets4kids.com




Volume = _____


7)



Volume = _____



Volume = _____



Volume = _____