




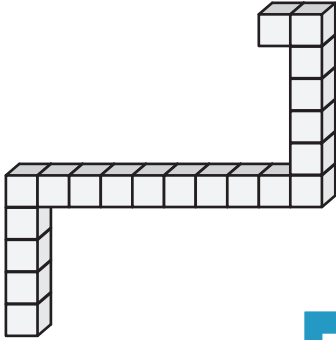
Counting Cubes - Solid Blocks

Count the cubes and find the volume of each solid block.


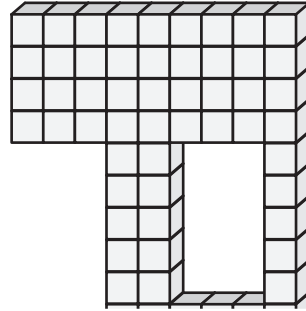
1)  = 6 in³

2)  = 3 ft³


3)  = 5 yd³

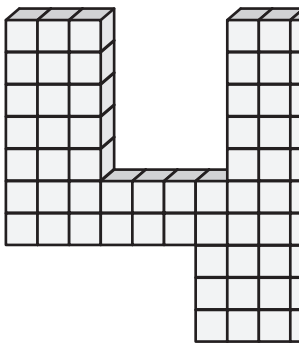


Volume = _____




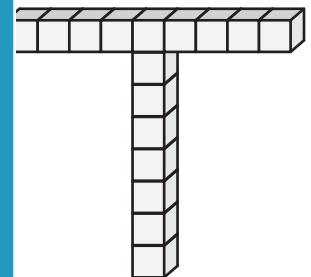
Volume = _____

4)  = 9 ft³




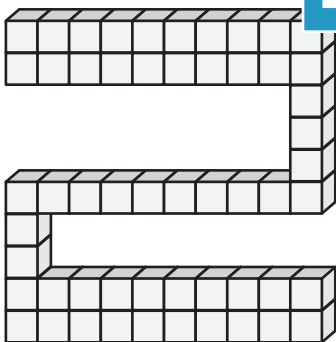
Volume = _____

 = 8 in³

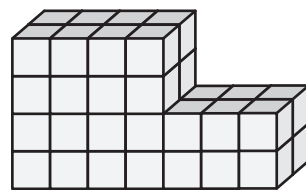


Volume = _____

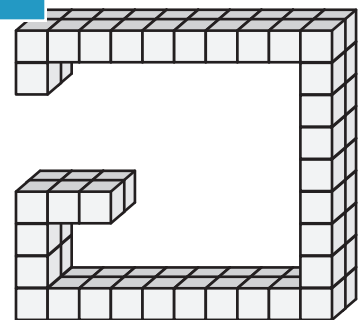
7)  = 7 yd³



Volume = _____



Volume = _____



Volume = _____

PREVIEW

Gain complete access to the largest collection of worksheets in all subjects!


Members, please log in to download this worksheet.

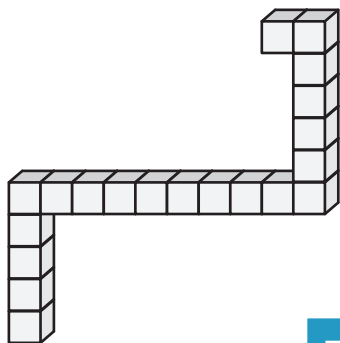
Not a member? Please sign up to gain complete access.

www.mathworksheets4kids.com


Counting Cubes - Solid Blocks

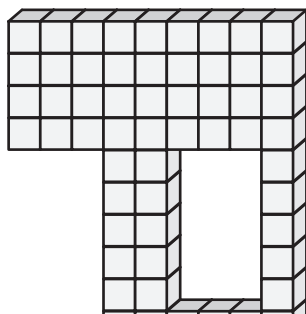
Count the cubes and find the volume of each solid block.

1)  = 6 in³



Volume = 120 in³

2)  = 3 ft³




PREVIEW


Gain complete access to the largest collection of worksheets in all subjects!

Members, please log in to download this worksheet.

Not a member? Please sign up to gain complete access.

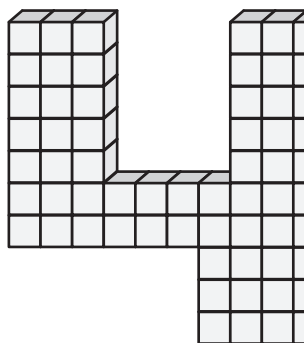
www.mathworksheets4kids.com

3)  = 5 yd³




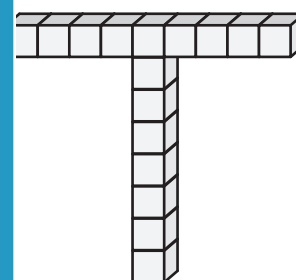
Volume = 245 yd³

4)  = 9 ft³



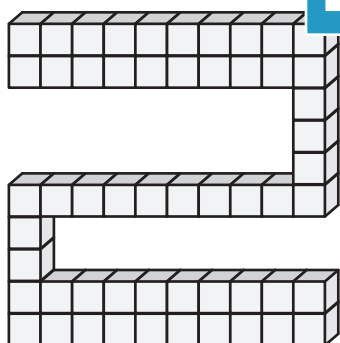
Volume = 558 ft³

 = 8 in³

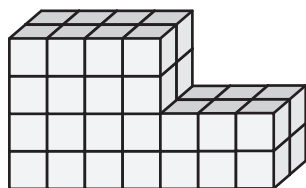


Volume = 128 in³

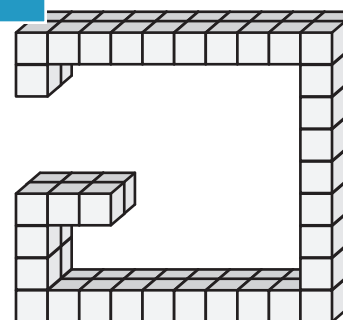
7)  = 7 yd³



Volume = 385 yd³



Volume = 176 in³



Volume = 132 ft³