

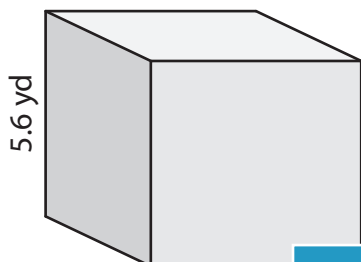
Name : _____

Volume - Cube

Sheet 3

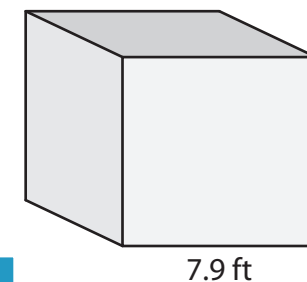
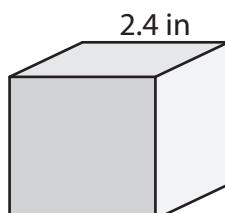
A) Find the volume of each cube. Round your answer to two decimal places.

1)



Volume = _____

2)



Volume = _____

B) Find the volume of each cube. Round your answer to two decimal places.

4) side length = 6.5 yd

Volume = _____

6) side length = 3.3 ft

Volume = _____

PREVIEW
Gain complete access to the largest collection of worksheets in all subjects!

Members, please log in to download this worksheet.

Not a member? Please sign up to gain complete access.

www.mathworksheets4kids.com

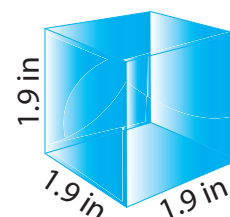
Round your answer to two decimal places.

in

yd

Volume = _____

8) Find the volume of the paper weight. Round your answer to two decimal places.



Name : _____

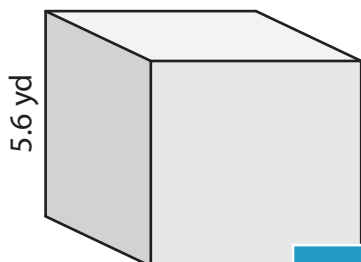
Answer key

Volume - Cube

Sheet 3

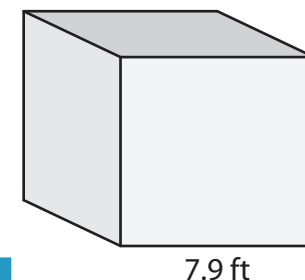
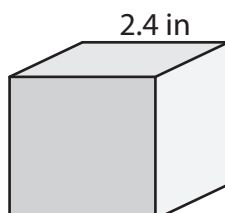
A) Find the volume of each cube. Round your answer to two decimal places.

1)



Volume = 175.62

2)



Volume = 493.04 ft³

B) Find the volume of each cube. Round your answer to two decimal places.

4) side length = 6.5 yd

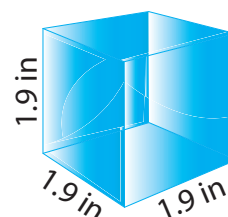
Volume = 274.63

6) side length = 3.3 ft

Volume = 35.94 ft³

Volume = 753.57 yd³

8) Find the volume of the paper weight. Round your answer to two decimal places.



6.86 cubic inches

PREVIEW

Gain complete access to the largest collection of worksheets in all subjects!

Members, please log in to download this worksheet.

Not a member? Please sign up to gain complete access.

www.mathworksheets4kids.com