

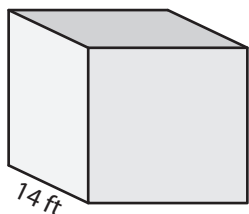
Name : _____

Volume - Cube

ES2

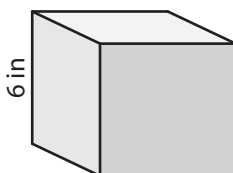
A) Find the volume of each cube.

1)



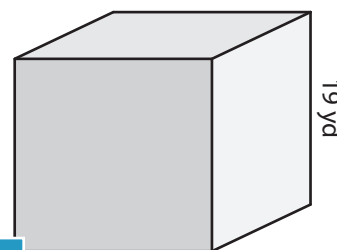
Volume = _____

2)



Volume = _____

3)



Volume = _____

B) Find the volume of each cube.

4) side length = 17 in

Volume = _____

6) side length = 9 yd

Volume = _____

PREVIEW
Gain complete access to the largest
collection of worksheets in all subjects!

Members, please
log in to
download this
worksheet.

Not a member?
Please sign up to
gain complete
access.

www.mathworksheets4kids.com

Volume = _____

8) A fabric storage cube with lid has a side length of 13 inches. Find the volume of the storage cube.

Name : _____

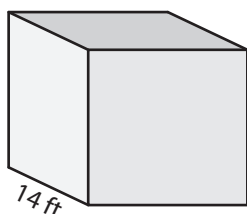
Answer key

Volume - Cube

ES2

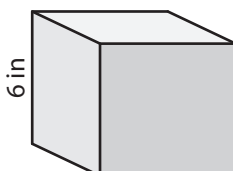
A) Find the volume of each cube.

1)



Volume = 2,744

2)



B) Find the volume of each cube.

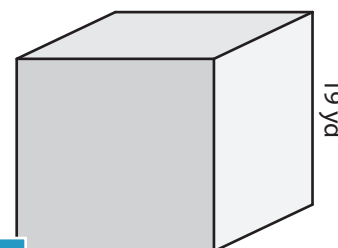
4) side length = 17 in

Volume = 4,913

6) side length = 9 yd

Volume = 729 yd³

3)



Volume = 6,859 yd³

Volume = 54 ft³

ft

Volume = 5,832 ft³

8) A fabric storage cube with lid has a side length of 13 inches. Find the volume of the storage cube.

2,197 cubic inches

PREVIEW

Gain complete access to the largest collection of worksheets in all subjects!

Members, please log in to download this worksheet.

Not a member? Please sign up to gain complete access.

www.mathworksheets4kids.com