

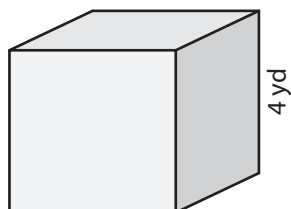
Name : _____

Volume - Cube

ES3

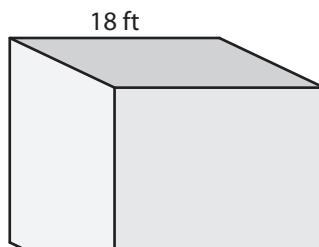
A) Find the volume of each cube.

1)



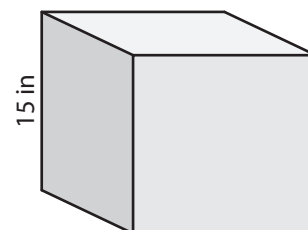
Volume = _____

2)



Volume = _____

3)



B) Find the volume of each cube.

4) side length = 5 yd

Volume = _____

6) side length = 12 ft

Volume = _____

PREVIEW

Gain complete access to the largest collection of worksheets in all subjects!

Members, please log in to download this worksheet.

Not a member? Please sign up to gain complete access.

www.mathworksheets4kids.com

Volume = _____

8) A cubical locker has a side length of 8 inches. How much space does the locker have?

Name : _____

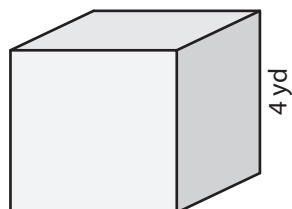
Answer key

Volume - Cube

ES3

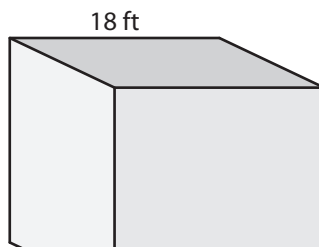
A) Find the volume of each cube.

1)



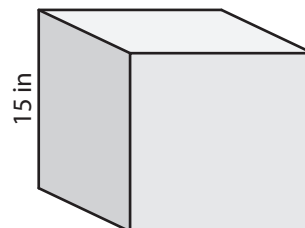
Volume = 64 yd³

2)



Volume = 3,375 in³

3)



B) Find the volume of each cube.

4) side length = 5 yd

Volume = 125 yd³

6) side length = 12 ft

Volume = 1,728 ft³

Volume = 343 in³

8) A cubical locker has a side length of 8 inches. How much space does the locker have?

512 cubic inches

PREVIEW

Gain complete access to the largest collection of worksheets in all subjects!

Members, please log in to download this worksheet.

Not a member? Please sign up to gain complete access.

www.mathworksheets4kids.com