

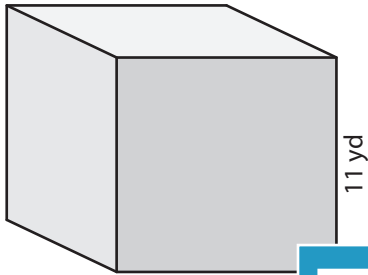
Name : _____

Volume - Cube

MS1

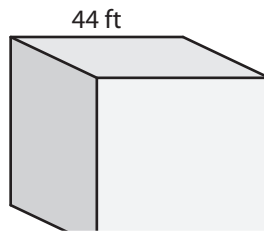
A) Find the volume of each cube.

1)



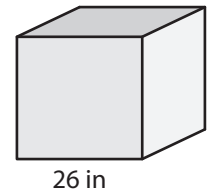
Volume = _____

2)



Volume = _____

3)



Volume = _____

B) Find the volume of each cube.

4) side length = 32 in

Volume = _____

6) side length = 25 ft

Volume = _____

Volume = _____

8) If a cubical gift box has a side length 20 inches, what is the volume of the box?

PREVIEW

Gain complete access to the largest collection of worksheets in all subjects!

Members, please log in to download this worksheet.

Not a member? Please sign up to gain complete access.

www.mathworksheets4kids.com

Name : _____

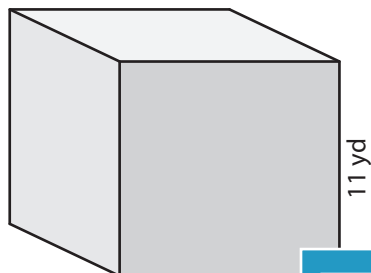
Answer key

Volume - Cube

MS1

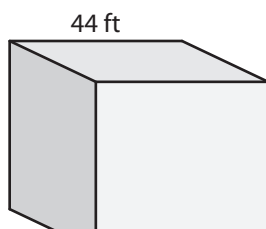
A) Find the volume of each cube.

1)



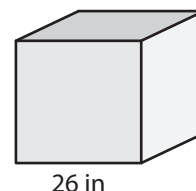
Volume = 1,331 yd³

2)



Volume = 17,576 in³

3)



B) Find the volume of each cube.

4) side length = 32 in

Volume = 32,768 in³

6) side length = 25 ft

Volume = 15,625 ft³

Volume = 59,319 yd³

8) If a cubical gift box has a side length 20 inches, what is the volume of the box?

8,000 cubic inches

PREVIEW

Gain complete access to the largest collection of worksheets in all subjects!

Members, please log in to download this worksheet.

Not a member? Please sign up to gain complete access.

www.mathworksheets4kids.com