

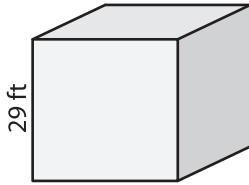
Name : _____

Volume - Cube

MS3

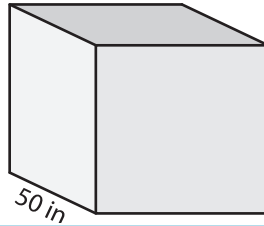
A) Find the volume of each cube.

1)



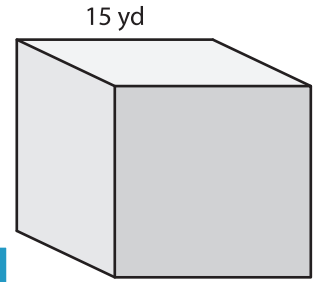
Volume = _____

2)



Volume = _____

3)



Volume = _____

B) Find the volume of each cube.

4) side length = 27 ft

Volume = _____

6) side length = 38 yd

Volume = _____

PREVIEW

Gain complete access to the largest collection of worksheets in all subjects!

Members, please log in to download this worksheet.

Not a member? Please sign up to gain complete access.

www.mathworksheets4kids.com

Volume = _____

8) A room has dimensions 25 ft × 25 ft × 25 ft. Find the volume of air that can occupy the room.
