

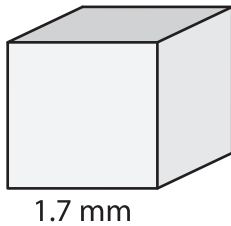
Name : _____

Volume - Cube

Sheet 1

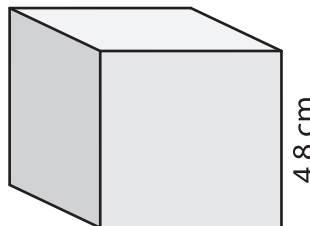
A) Find the volume of each cube. Round your answer to two decimal places.

1)



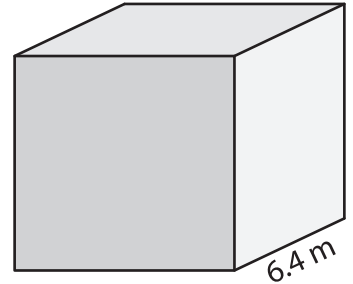
Volume = _____

2)



Volume = _____

3)



Volume = _____

B) Find the volume of each cube from the given side length. Round your answer to two decimal places.

4) side length = 2.3 mm

Volume = _____

5) side length = 5.1 cm

Volume = _____

6) side length = 7.2 m

Volume = _____

7) side length = 3.5 mm

Volume = _____

8) A cubical water tank has a height of 2.8 m. How much water can the tank hold?
Round your answer to two decimal places.
