

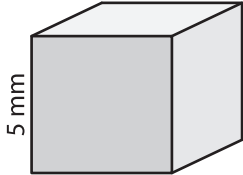
Name : _____

Volume - Cube

ES1

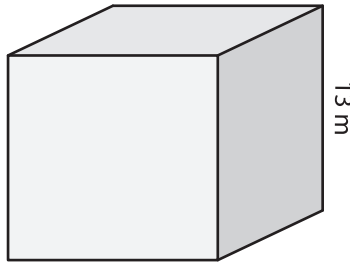
A) Find the volume of each cube.

1)



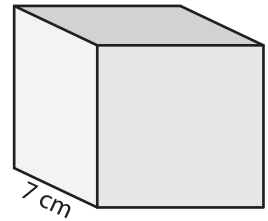
Volume = _____

2)



Volume = _____

3)



Volume = _____

B) Find the volume of each cube from the given side length.

4) side length = 8 cm

Volume = _____

5) side length = 20 mm

Volume = _____

6) side length = 11 mm

Volume = _____

7) side length = 3 m

Volume = _____

8) The length of each side of a cubical wooden block is 15 cm. What is the volume of the block?
