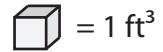



Counting Cubes - Rectangular Prism

ES1

Count the cubes and find the volume of each rectangular prism.

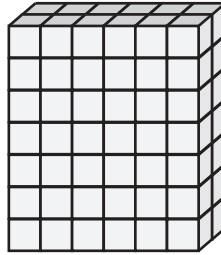


1)



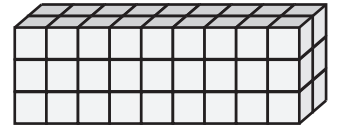
Volume = _____

2)




Volume = _____

3)



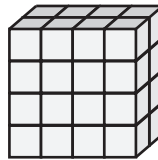
Volume = _____

4)



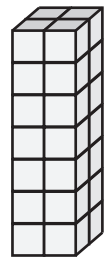
Volume = _____

5)




Volume = _____

6)



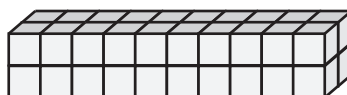
Volume = _____

7)




Volume = _____

8)



Volume = _____

9)




Volume = _____


Answer Key**Counting Cubes - Rectangular Prism**

ES1

Count the cubes and find the volume of each rectangular prism.

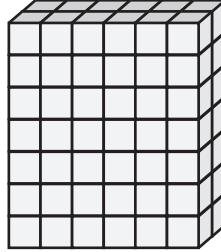
 = 1 ft³

1)



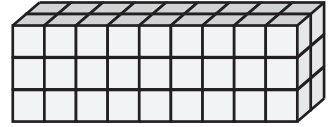
Volume = 56 ft³

2)




Volume = 84 ft³

3)



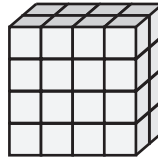
Volume = 54 ft³

4)



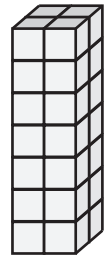
Volume = 48 ft³

5)




Volume = 32 ft³

6)



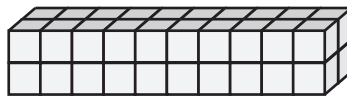
Volume = 28 ft³

7)




Volume = 70 ft³

8)



Volume = 40 ft³

9)



Volume = 80 ft³