



Counting Cubes - Rectangular Prism

ES2

Count the cubes and find the volume of each rectangular prism.

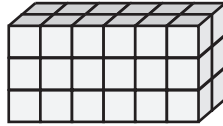
 = 1 yd³

1)




Volume = _____

2)




Volume = _____

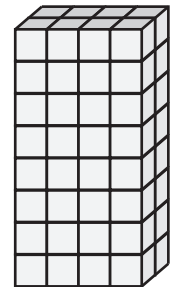
3)



4)




Volume = _____




Volume = _____

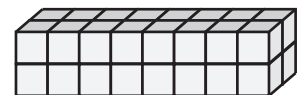
7)



Volume = _____



Volume = _____



Volume = _____

PREVIEW

Access the largest collection of
worksheets for just **\$19.95** per year!

Members, please
log in to
download this
worksheet.

Log in

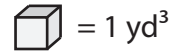
Not a member?
Please sign up to
gain complete
access.

Sign up


www.mathworksheets4kids.com

Counting Cubes - Rectangular Prism

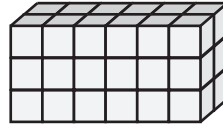
Count the cubes and find the volume of each rectangular prism.




1)

Volume = 40 yd³


2)

Volume = 50 yd³

3)



4)

Volume = 80 yd³

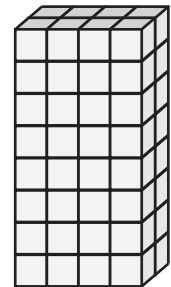
PREVIEW

Access the largest collection of
worksheets for just **\$19.95** per year!



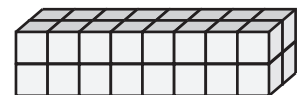
Members, please
log in to
download this
worksheet.

Log in

Not a member?
Please sign up to
gain complete
access.

Sign up
www.mathworksheets4kids.com
Volume = 64 yd³

7)

Volume = 42 yd³Volume = 54 yd³Volume = 32 yd³