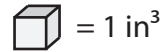



Counting Cubes - Rectangular Prism

ES3

Count the cubes and find the volume of each rectangular prism.

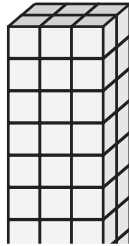


1)



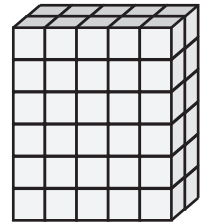
Volume = _____

2)

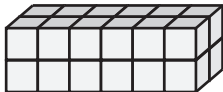


Volume = _____

3)



4)



Volume = _____

PREVIEW

Access the largest collection of
worksheets for just **\$19.95** per year!

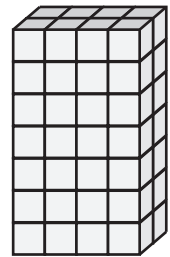
Members, please
log in to
download this
worksheet.

Log in

Not a member?
Please sign up to
gain complete
access.

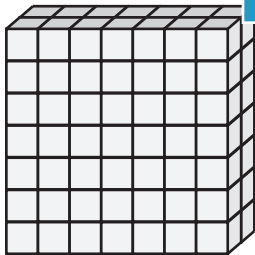
Sign up

www.mathworksheets4kids.com




Volume = _____

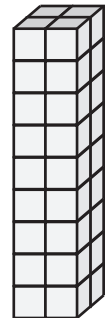
7)



Volume = _____



Volume = _____

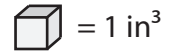


Volume = _____


Counting Cubes - Rectangular Prism

ES3


Count the cubes and find the volume of each rectangular prism.



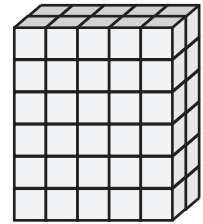
1)

Volume = 70 in³

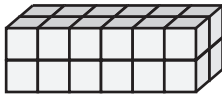
2)

Volume = 60 in³

3)



4)

Volume = 24 in³

PREVIEW

Access the largest collection of worksheets for just **\$19.95** per year!


Members, please log in to download this worksheet.

Log in

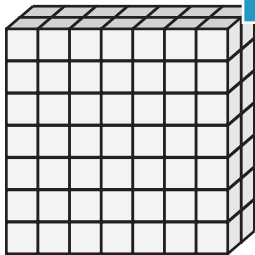

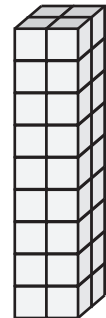
Not a member? Please sign up to gain complete access.

Sign up

www.mathworksheets4kids.com

Volume = 56 in³

7)

Volume = 98 in³Volume = 40 in³Volume = 36 in³