


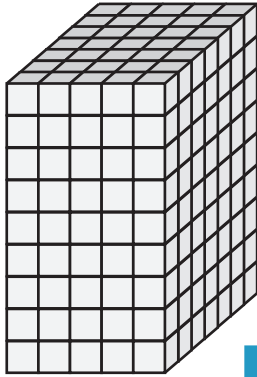
Counting Cubes - Rectangular Prism

MS1

Count the cubes and find the volume of each rectangular prism.

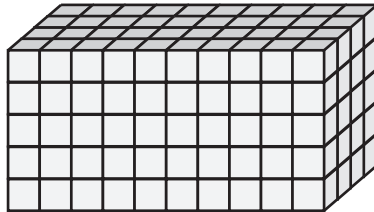
 = 1 ft³

1)



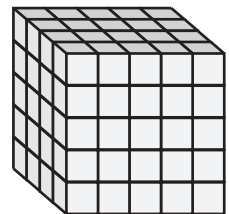
Volume = _____

2)

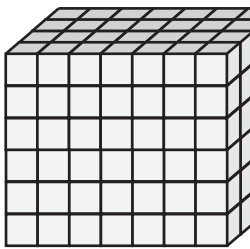


Volume = _____

3)



4)



Volume = _____

PREVIEW
 Access the largest collection of
 worksheets for just **\$19.95** per year!

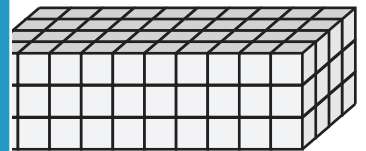
Members, please
 log in to
 download this
 worksheet.

Log in

Not a member?
 Please sign up to
 gain complete
 access.


Sign up

www.mathworksheets4kids.com

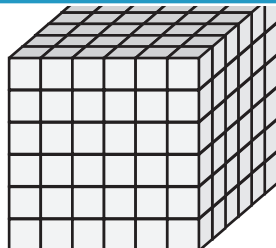


Volume = _____

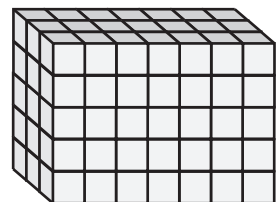
7)



Volume = _____



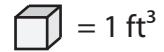
Volume = _____



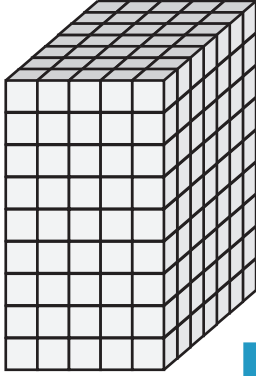
Volume = _____

Counting Cubes - Rectangular Prism

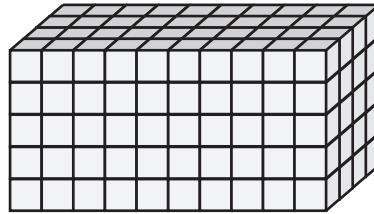
Count the cubes and find the volume of each rectangular prism.



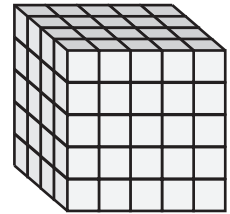
1)

Volume = 315 ft³

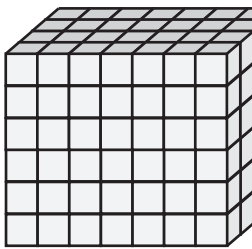
2)

Volume = 100 ft³

3)



4)

Volume = 168 ft³


PREVIEW

Access the largest collection of
worksheets for just **\$19.95** per year!


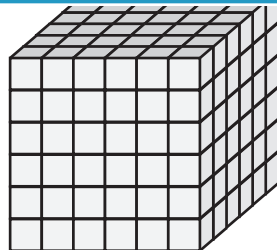
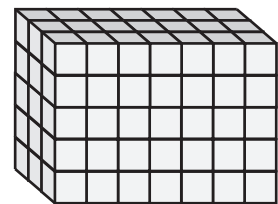
Members, please
log in to
download this
worksheet.

Log in

Not a member?
Please sign up to
gain complete
access.

Sign up
www.mathworksheets4kids.com
Volume = 120 ft³

7)

Volume = 112 ft³Volume = 216 ft³Volume = 105 ft³