



Counting Cubes - Rectangular Prism

MS2

Count the cubes and find the volume of each rectangular prism.


 = 1 yd³

1)




Volume = _____

2)

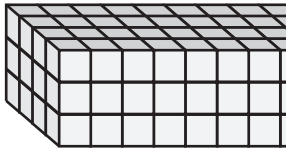


Volume = _____

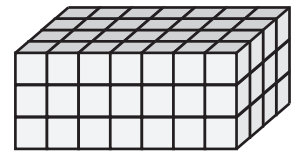
3)



4)

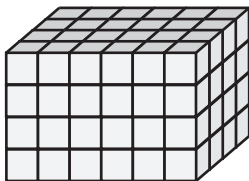


Volume = _____




Volume = _____

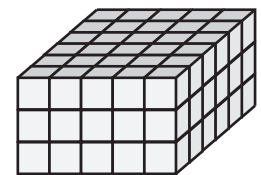
7)



Volume = _____



Volume = _____



Volume = _____

PREVIEW

Access the largest collection of
worksheets for just **\$19.95** per year!

Members, please
log in to
download this
worksheet.

Log in

Not a member?
Please sign up to
gain complete
access.


Sign up

www.mathworksheets4kids.com


Counting Cubes - Rectangular Prism

MS2

Count the cubes and find the volume of each rectangular prism.


 = 1 yd³

1)




Volume = 128 yd³

2)

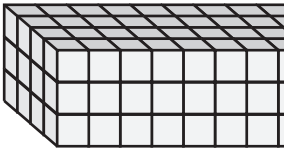


Volume = 192 yd³

3)



4)



Volume = 120 yd³

PREVIEW

Access the largest collection of worksheets for just **\$19.95** per year!

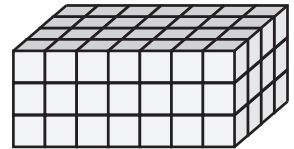
Members, please log in to download this worksheet.

Log in

Not a member? Please sign up to gain complete access.

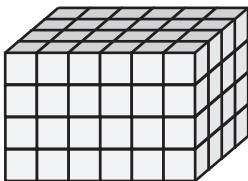
Sign up

www.mathworksheets4kids.com




Volume = 84 yd³

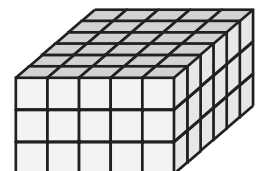
7)



Volume = 96 yd³



Volume = 72 yd³



Volume = 90 yd³