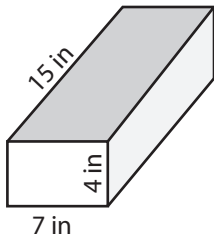


Volume - Mixed Shapes

ES2

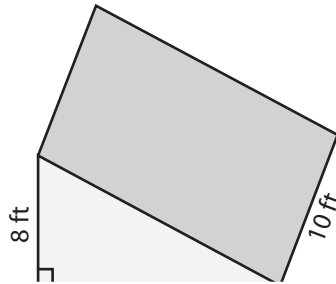
Find the exact volume of each shape.

1)



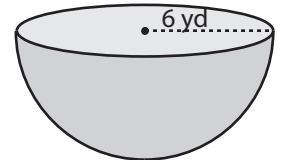
Volume = _____

2)

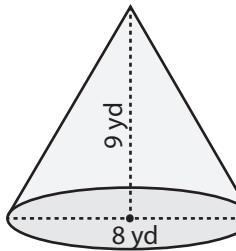


Volume = _____

3)



4)



Volume = _____

PREVIEW

Access the largest collection of
worksheets for just **\$19.95** per year!

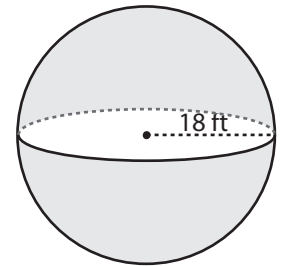
Members, please
log in to
download this
worksheet.

Log in

Not a member?
Please sign up to
gain complete
access.

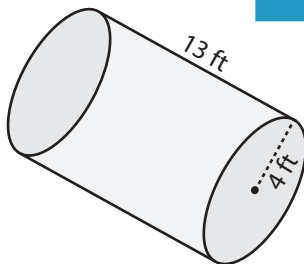
Sign up

www.mathworksheets4kids.com

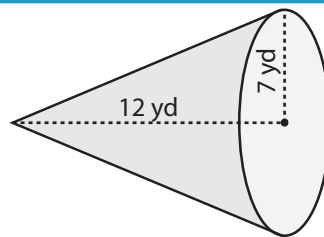


Volume = _____

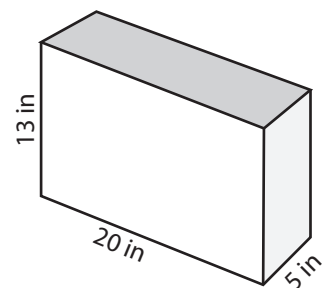
7)



Volume = _____



Volume = _____



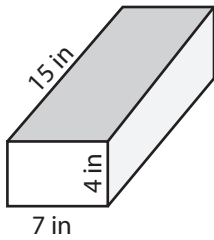
Volume = _____

Answer Key**Volume - Mixed Shapes**

ES2

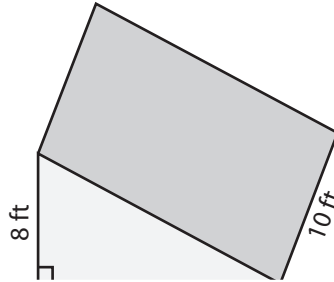
Find the exact volume of each shape.

1)



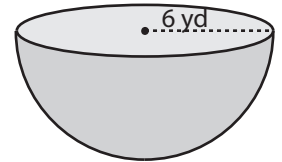
Volume = 420 in³

2)

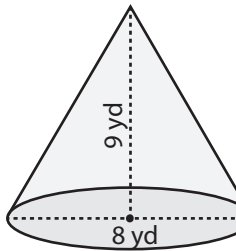


Volume = 144π yd³

3)



4)



Volume = 48π yd³

PREVIEW

Access the largest collection of
worksheets for just **\$19.95** per year!

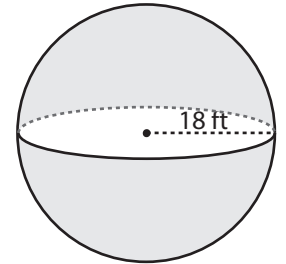
Members, please
log in to
download this
worksheet.

Log in

Not a member?
Please sign up to
gain complete
access.

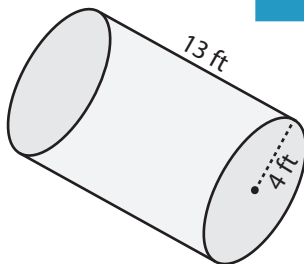
Sign up

www.mathworksheets4kids.com

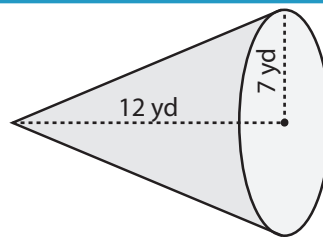


Volume = 7776π ft³

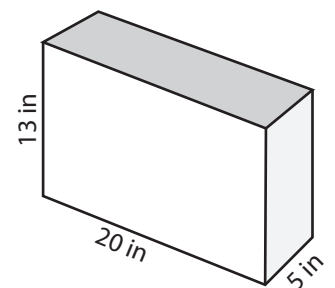
7)



Volume = 208π ft³



Volume = 196π yd³



Volume = 1300 in³