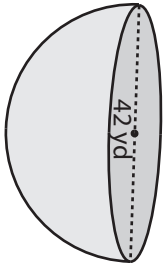


Volume - Mixed Shapes

MS1

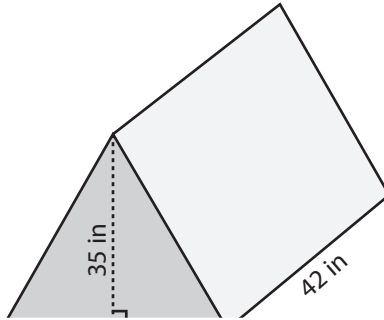
Find the volume of each shape. Round the answer to nearest tenth. (use $\pi = 3.14$)

1)



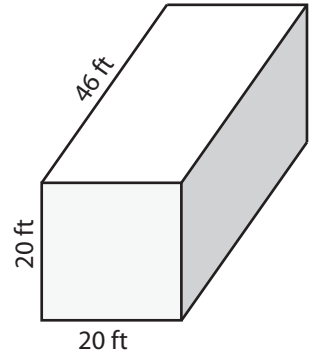
Volume = _____

2)

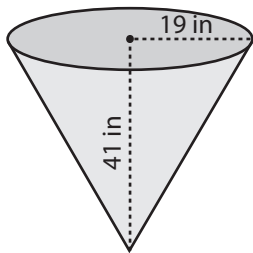


Volume = _____

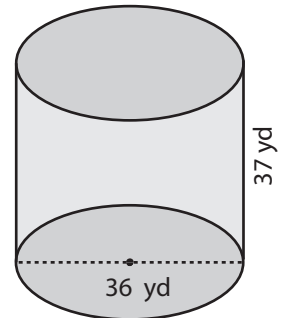
3)



4)

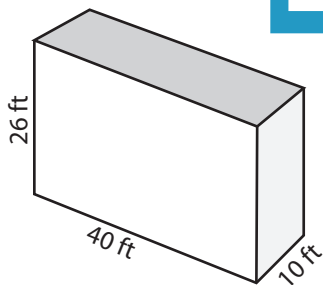


Volume = _____

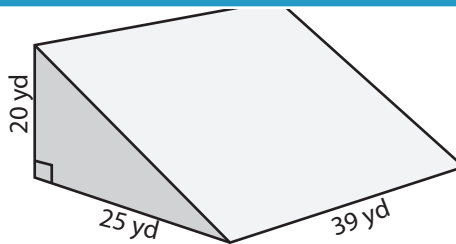


Volume = _____

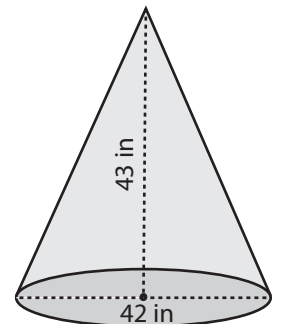
7)



Volume = _____



Volume = _____



Volume = _____

PREVIEW

Access the largest collection of
worksheets for just **\$19.95** per year!

Members, please
log in to
download this
worksheet.

Log in

Not a member?
Please sign up to
gain complete
access.

Sign up

www.mathworksheets4kids.com

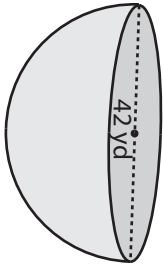
Answer Key

Volume - Mixed Shapes

MS1

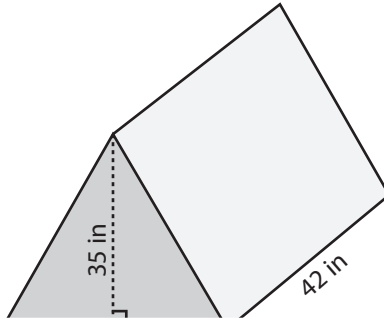
Find the volume of each shape. Round the answer to nearest tenth. (use $\pi = 3.14$)

1)



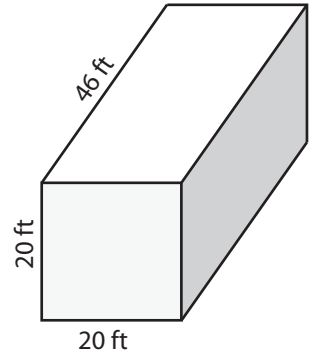
Volume = 19386.4 yd³

2)

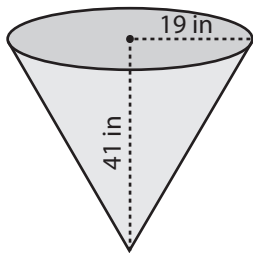


Volume = 18400 ft³

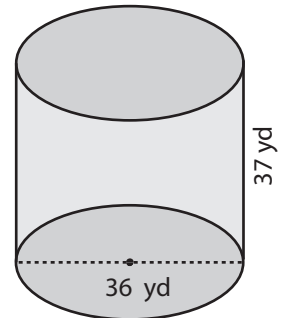
3)



4)



Volume = 15491.7 in³



Volume = 37642.3 yd³

PREVIEW

Access the largest collection of worksheets for just **\$19.95** per year!

Members, please log in to download this worksheet.

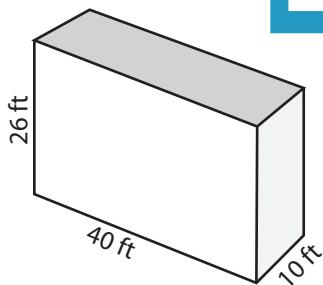
Log in

Not a member? Please sign up to gain complete access.

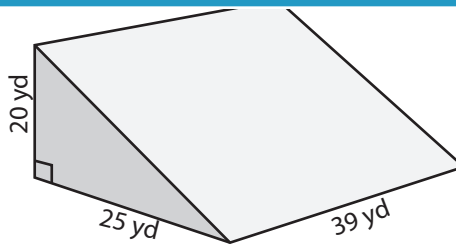
Sign up

www.mathworksheets4kids.com

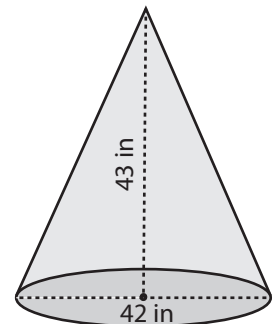
7)



Volume = 10400 ft³



Volume = 9750 yd³



Volume = 19847.9 in³