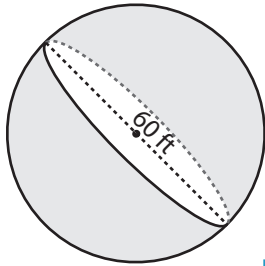


Volume - Mixed Shapes

MS3

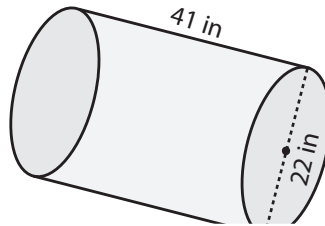
Find the volume of each shape. Round the answer to nearest tenth. (use $\pi = 3.14$)

1)



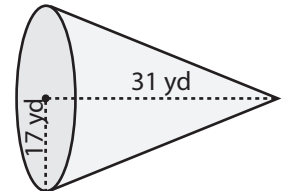
Volume = _____

2)

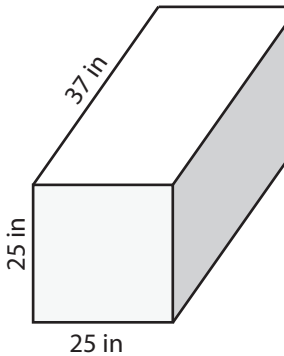


Volume = _____

3)



4)



Volume = _____

PREVIEW

Access the largest collection of
worksheets for just **\$19.95** per year!

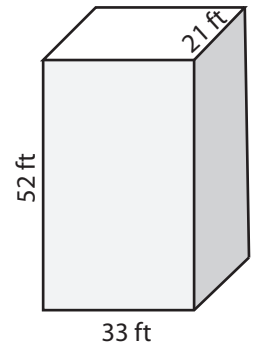
Members, please
log in to
download this
worksheet.

Log in

Not a member?
Please sign up to
gain complete
access.

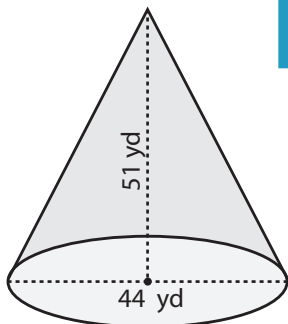
Sign up

www.mathworksheets4kids.com

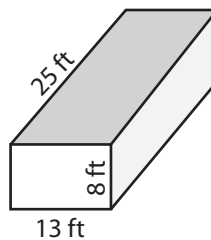


Volume = _____

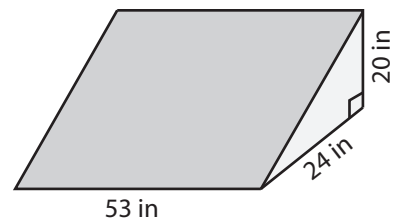
7)



Volume = _____



Volume = _____



Volume = _____

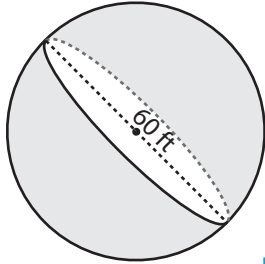
Answer Key

Volume - Mixed Shapes

MS3

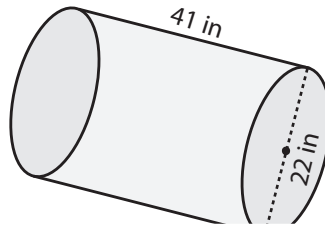
Find the volume of each shape. Round the answer to nearest tenth. (use $\pi = 3.14$)

1)



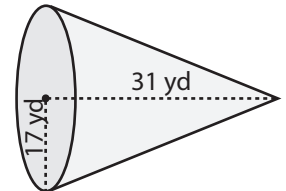
Volume = 113040 ft³

2)

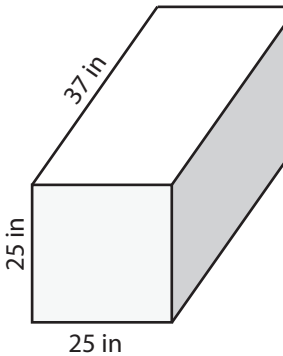


Volume = 9377.1 yd³

3)



4)



Volume = 23125 in³

PREVIEW

Access the largest collection of worksheets for just **\$19.95** per year!

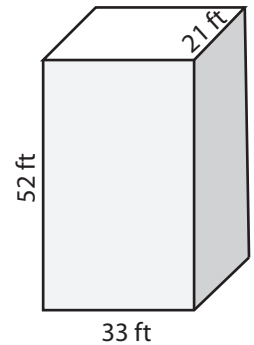
Members, please log in to download this worksheet.

Log in

Not a member? Please sign up to gain complete access.

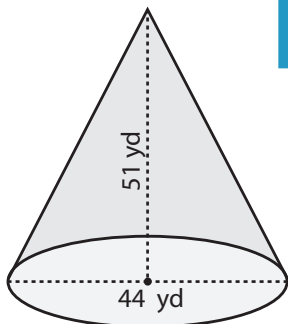
Sign up

www.mathworksheets4kids.com

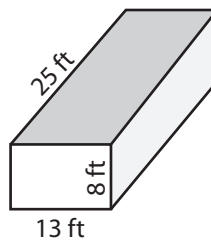


Volume = 36036 ft³

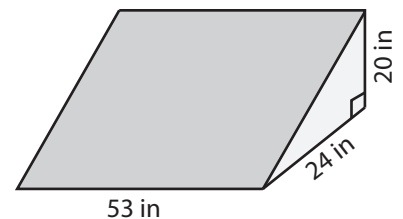
7)



Volume = 25835.9 yd³



Volume = 2600 ft³



Volume = 12720 in³