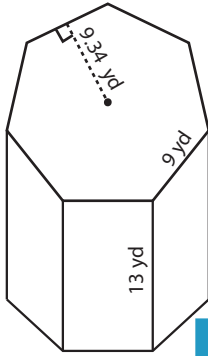


**Volume of Polygonal Prism**

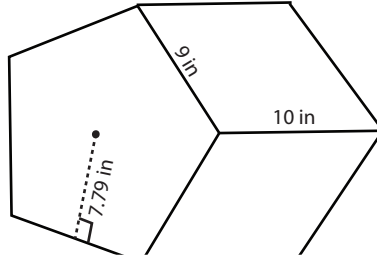
Find the volume of each polygonal prism.

1)



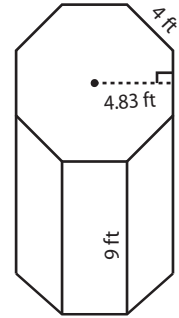
Volume = \_\_\_\_\_

2)



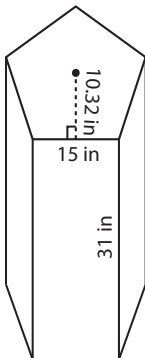
Volume = \_\_\_\_\_

3)



Volume = \_\_\_\_\_

4)



Volume = \_\_\_\_\_

Access the largest collection of worksheets for just **\$19.95** per year!

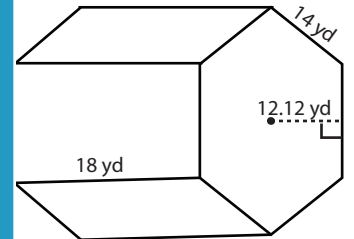
Members, please log in to download this worksheet.

**Log in**

Not a member? Please sign up to gain complete access.

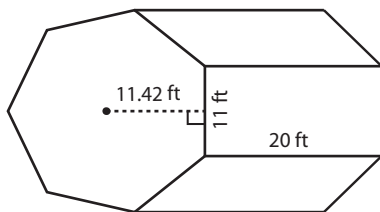
**Sign up**

[www.mathworksheets4kids.com](http://www.mathworksheets4kids.com)

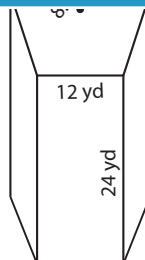


Volume = \_\_\_\_\_

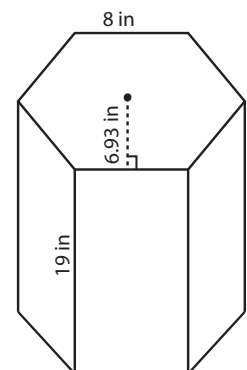
7)



Volume = \_\_\_\_\_



Volume = \_\_\_\_\_



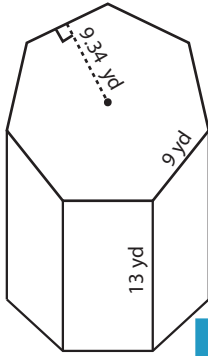
Volume = \_\_\_\_\_

**Answer Key**

**Volume of Polygonal Prism**

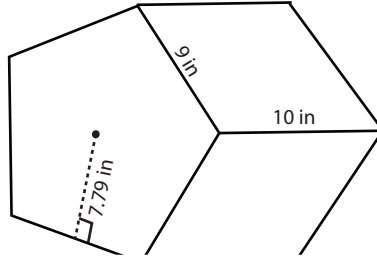
Find the volume of each polygonal prism.

1)



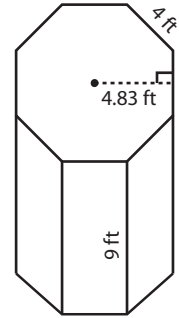
Volume = 3824.73 y

2)

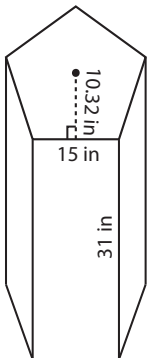


Volume = 695.52 ft<sup>3</sup>

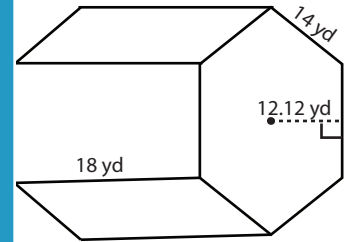
3)



4)

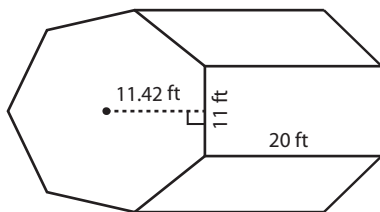


Volume = 11997 in

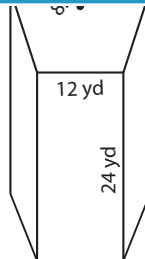


Volume = 9162.72 yd<sup>3</sup>

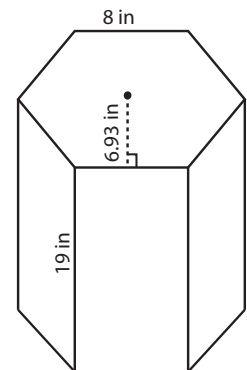
7)



Volume = 8793.4 ft<sup>3</sup>



Volume = 5947.2 yd<sup>3</sup>



Volume = 3160.08 in<sup>3</sup>

**PREVIEW**

Access the largest collection of worksheets for just **\$19.95** per year!

Members, please log in to download this worksheet.

**Log in**

Not a member? Please sign up to gain complete access.

**Sign up**

[www.mathworksheets4kids.com](http://www.mathworksheets4kids.com)