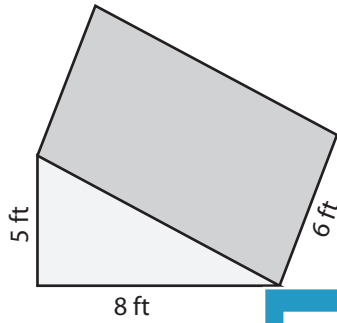


Volume: Prisms & Cylinders

L1ES2

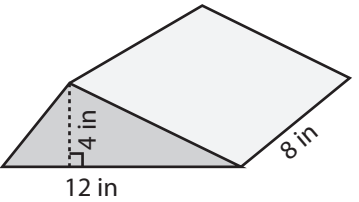
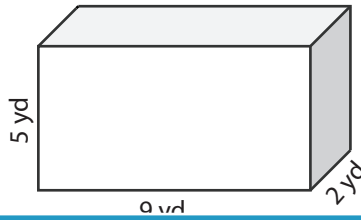
Find the exact volume of each shape.

1)



Volume = _____

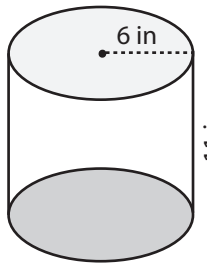
2)



3)

Volume = _____

4)



Volume = _____

PREVIEW

Access the largest collection of
worksheets for just **\$19.95** per year!

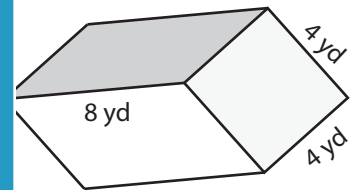
Members, please
log in to
download this
worksheet.

Log in

Not a member?
Please sign up to
gain complete
access.

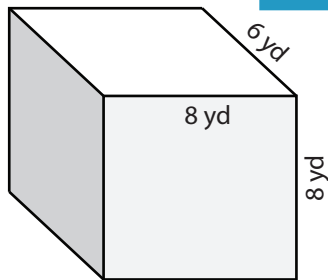
Sign up

www.mathworksheets4kids.com

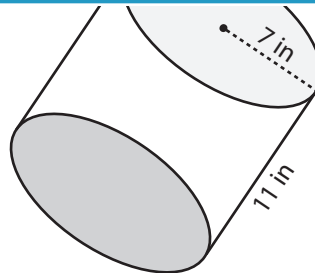


Volume = _____

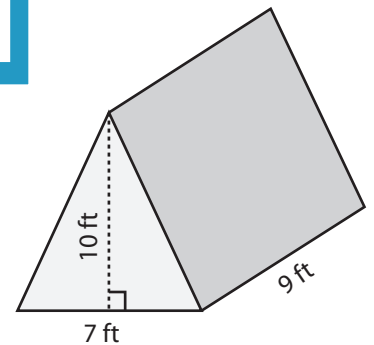
7)



Volume = _____



Volume = _____



Volume = _____

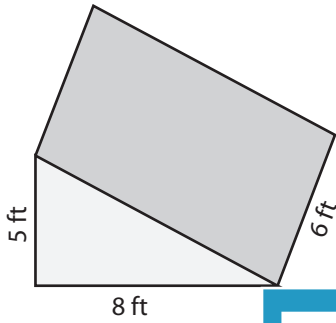
Answer Key

Volume: Prisms & Cylinders

L1ES2

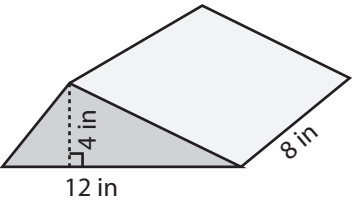
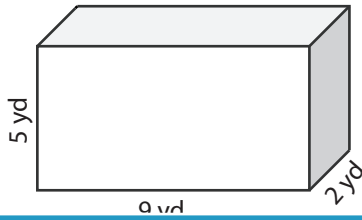
Find the exact volume of each shape.

1)



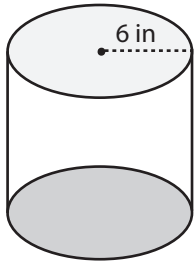
Volume = 120 ft³

2)



Volume = 192 in³

4)



Volume = 396π in³

Access the largest collection of worksheets for just **\$19.95** per year!

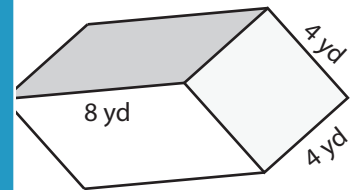
Members, please log in to download this worksheet.

Log in

Not a member? Please sign up to gain complete access.

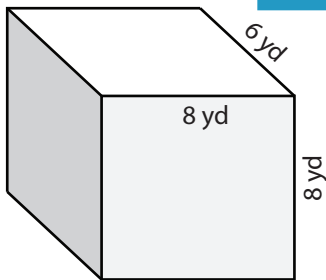
Sign up

www.mathworksheets4kids.com

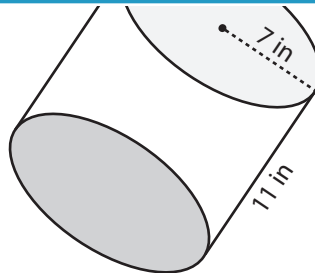


Volume = 128 yd³

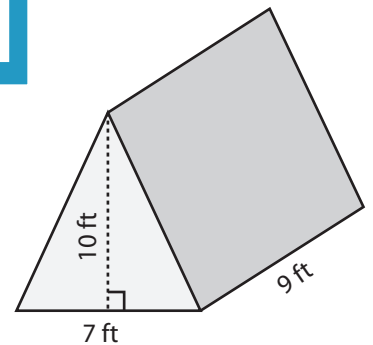
7)



Volume = 384 yd³



Volume = 539π in³



Volume = 315 ft³