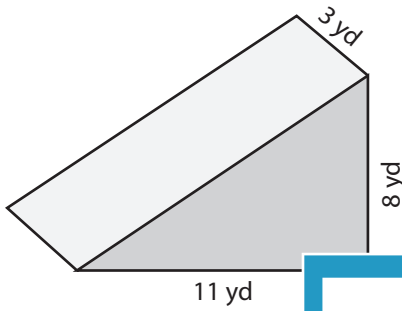


Volume: Prisms & Cylinders

L1ES3

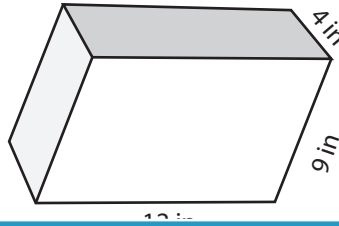
Find the exact volume of each shape.

1)



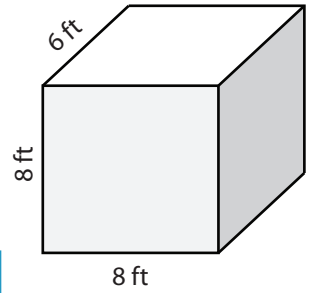
Volume = _____

2)

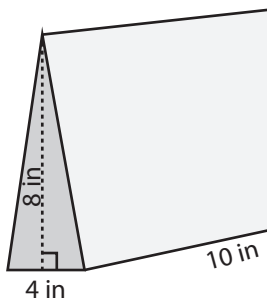


Volume = _____

3)



4)



Volume = _____

PREVIEW

Access the largest collection of
worksheets for just **\$19.95** per year!

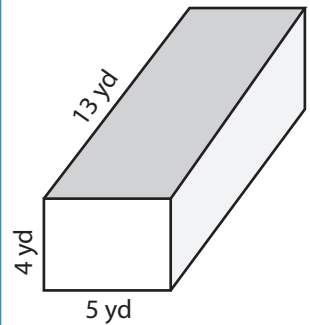
Members, please
log in to
download this
worksheet.

Log in

Not a member?
Please sign up to
gain complete
access.

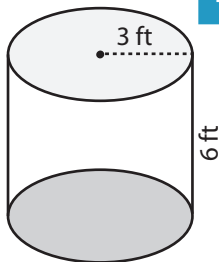
Sign up

www.mathworksheets4kids.com

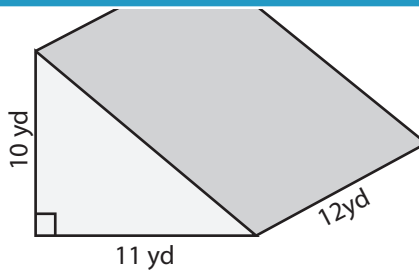


Volume = _____

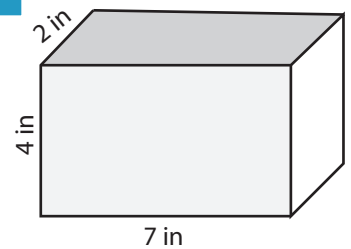
7)



Volume = _____



Volume = _____



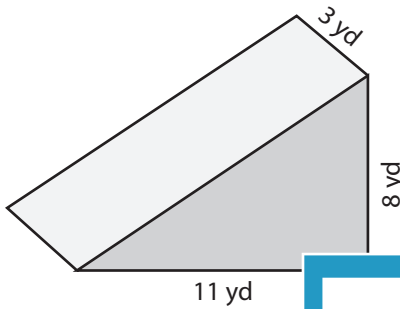
Volume = _____

Answer Key**Volume: Prisms & Cylinders**

L1ES3

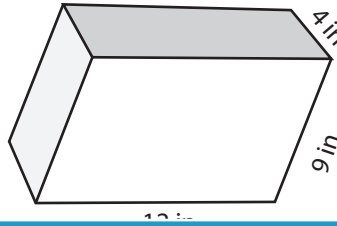
Find the exact volume of each shape.

1)



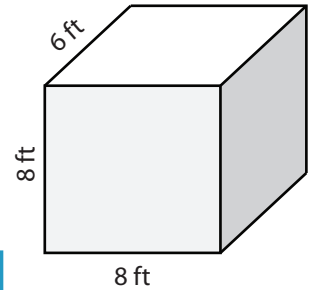
Volume = 132 yd³

2)

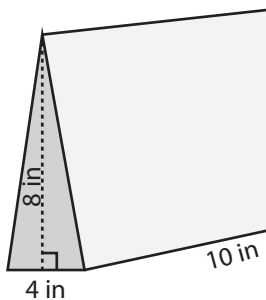


Volume = 384 ft³

3)



4)



Volume = 160 in³

Access the largest collection of
worksheets for just **\$19.95** per year!

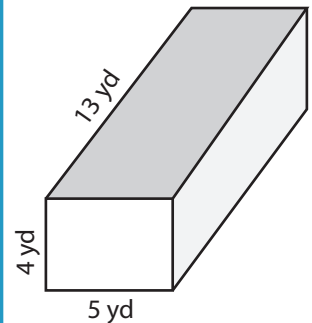
Members, please
log in to
download this
worksheet.

Log in

Not a member?
Please sign up to
gain complete
access.

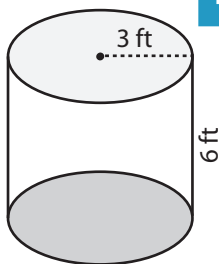
Sign up

www.mathworksheets4kids.com

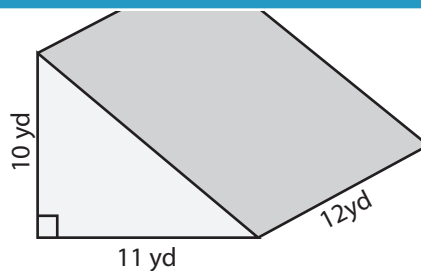


Volume = 260 yd³

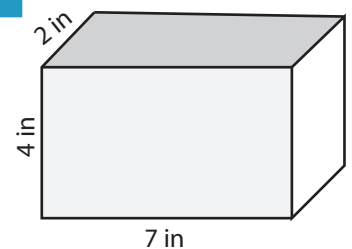
7)



Volume = 54π ft³



Volume = 660 yd³



Volume = 56 in³