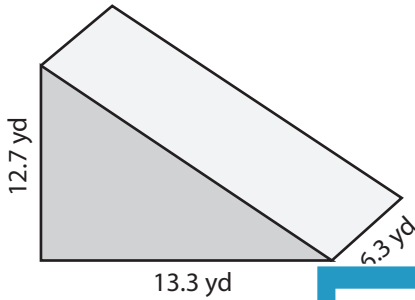


**Volume: Prisms & Cylinders**

L1DS1

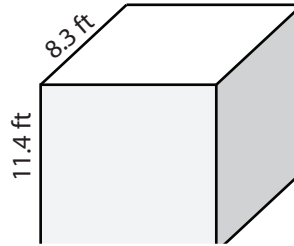
Find the volume of each shape. Round the answer to nearest tenth. ( use  $\pi = 3.14$  )

1)



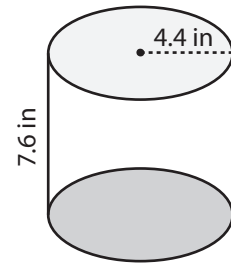
Volume = \_\_\_\_\_

2)

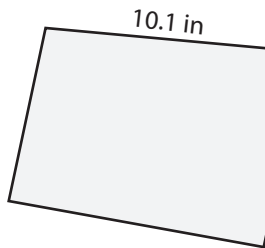


Volume = \_\_\_\_\_

3)



4)



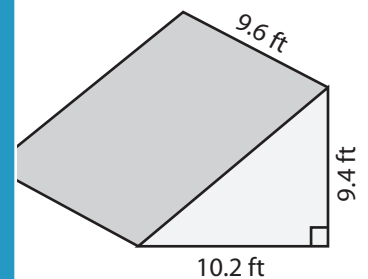
Volume = \_\_\_\_\_

Access the largest collection of worksheets for just **\$19.95** per year!

Members, please log in to download this worksheet. **Log in**

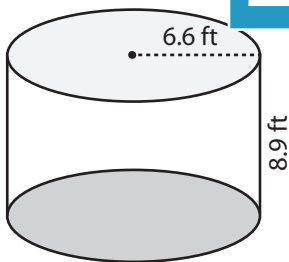
Not a member? Please sign up to gain complete access. **Sign up**

[www.mathworksheets4kids.com](http://www.mathworksheets4kids.com)

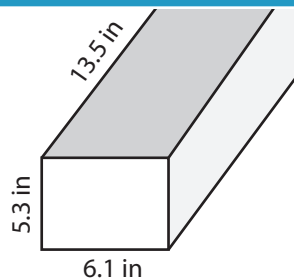


Volume = \_\_\_\_\_

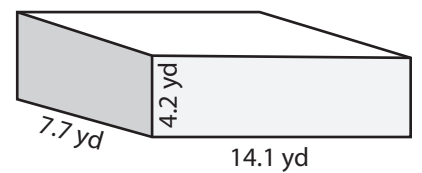
7)



Volume = \_\_\_\_\_



Volume = \_\_\_\_\_



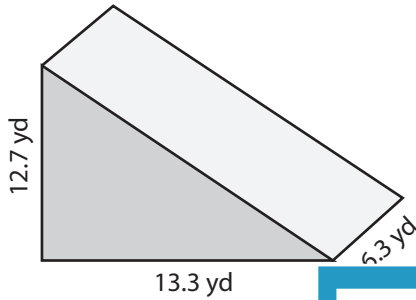
Volume = \_\_\_\_\_

**Answer Key****Volume: Prisms & Cylinders**

L1DS1

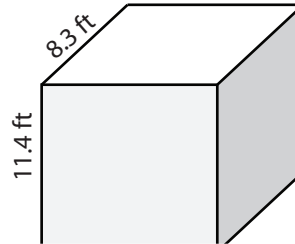
Find the volume of each shape. Round the answer to nearest tenth. ( use  $\pi = 3.14$  )

1)



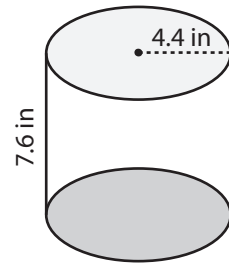
Volume = 532.1 yd<sup>3</sup>

2)

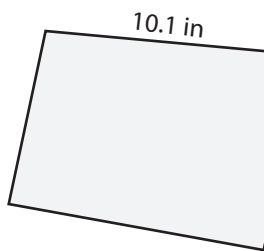


Volume = 462 in<sup>3</sup>

3)



4)



Volume = 88 in<sup>3</sup>

Access the largest collection of  
worksheets for just **\$19.95** per year!

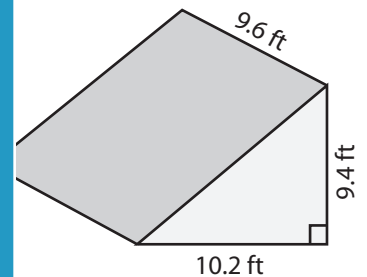
Members, please  
log in to  
download this  
worksheet.

**Log in**

Not a member?  
Please sign up to  
gain complete  
access.

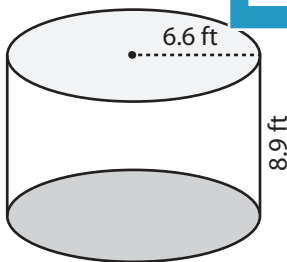
**Sign up**

[www.mathworksheets4kids.com](http://www.mathworksheets4kids.com)

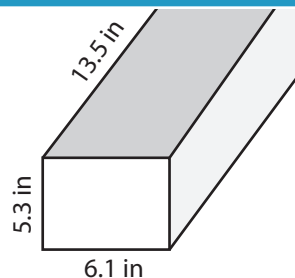


Volume = 460.2 ft<sup>3</sup>

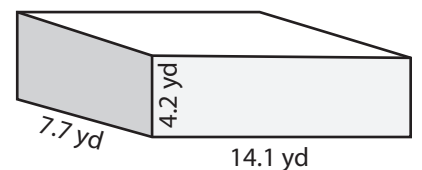
7)



Volume = 1217.3 ft<sup>3</sup>



Volume = 436.5 in<sup>3</sup>



Volume = 456 yd<sup>3</sup>