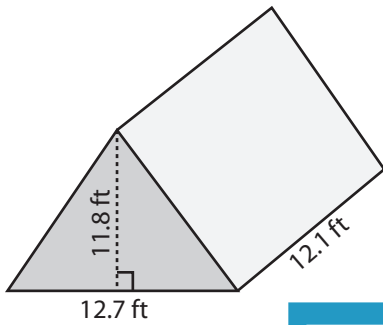


Volume: Prisms & Cylinders

L1DS2

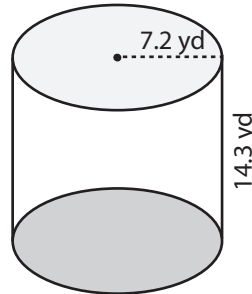
Find the volume of each shape. Round the answer to nearest tenth. (use $\pi = 3.14$)

1)



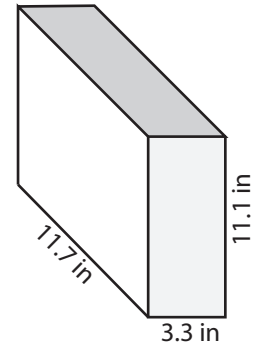
Volume = _____

2)

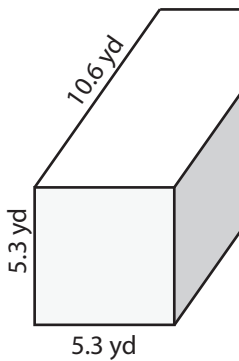


Volume = _____

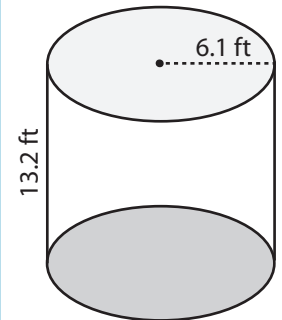
3)



4)

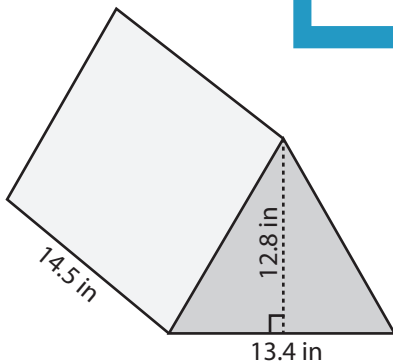


Volume = _____

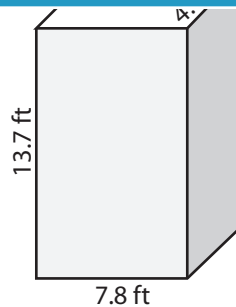


Volume = _____

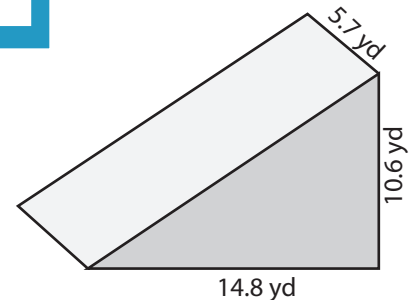
7)



Volume = _____



Volume = _____



Volume = _____

PREVIEW

Access the largest collection of
worksheets for just **\$19.95** per year!

Members, please
log in to
download this
worksheet.

Log in

Not a member?
Please sign up to
gain complete
access.

Sign up

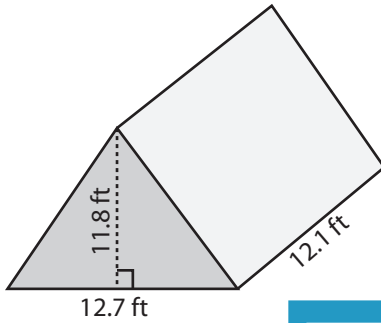
www.mathworksheets4kids.com

Answer Key**Volume: Prisms & Cylinders**

L1DS2

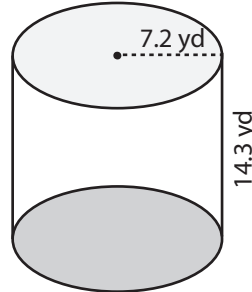
Find the volume of each shape. Round the answer to nearest tenth. (use $\pi = 3.14$)

1)



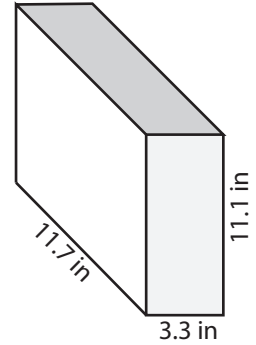
Volume = 906.7 ft³

2)

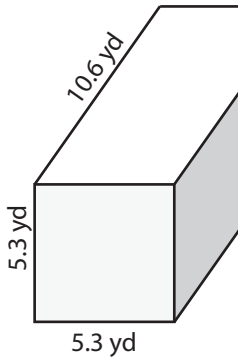


Volume = 428.6 in³

3)



4)



Volume = 297.8 yd³

Access the largest collection of
worksheets for just **\$19.95** per year!

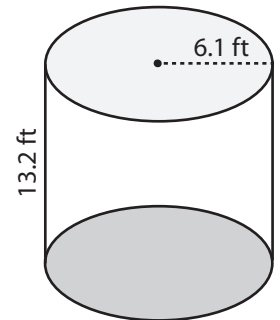
Members, please
log in to
download this
worksheet.

Log in

Not a member?
Please sign up to
gain complete
access.

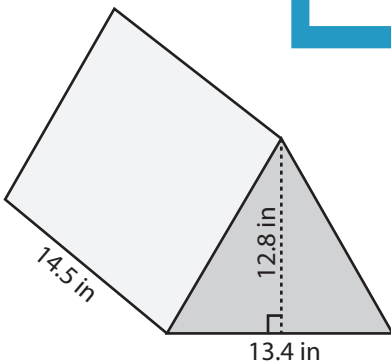
Sign up

www.mathworksheets4kids.com

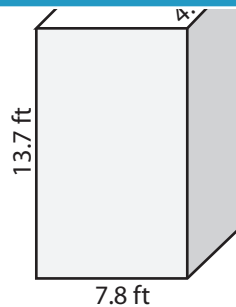


Volume = 1542.3 ft³

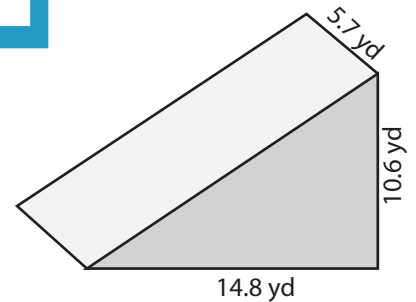
7)



Volume = 1243.5 in³



Volume = 438.1 ft³



Volume = 447.1 yd³