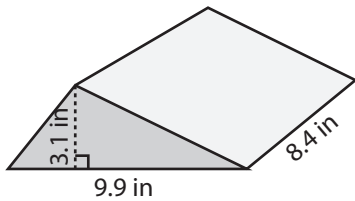


Volume: Prisms & Cylinders

L1DS3

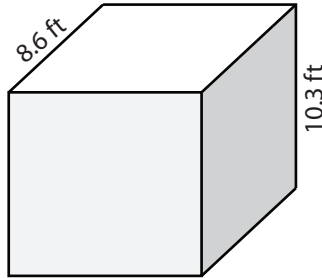
Find the volume of each shape. Round the answer to nearest tenth. (use $\pi = 3.14$)

1)



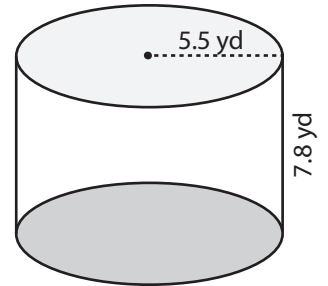
Volume = _____

2)

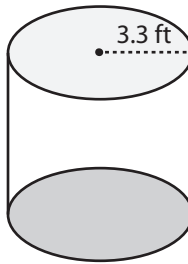


Volume = _____

3)



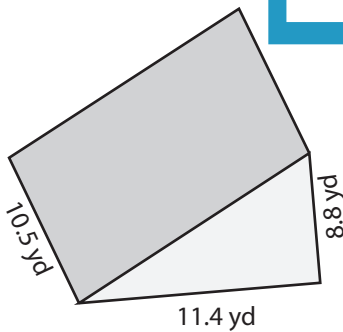
4)



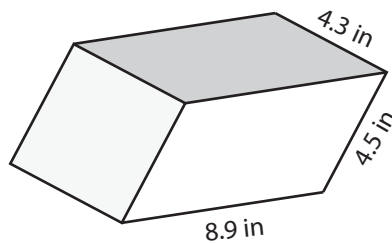
Volume = _____

Volume = _____

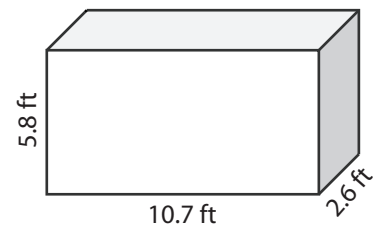
7)



Volume = _____



Volume = _____



Volume = _____

PREVIEW

Access the largest collection of worksheets for just **\$19.95** per year!

Members, please log in to download this worksheet.

Log in

Not a member? Please sign up to gain complete access.

Sign up

www.mathworksheets4kids.com

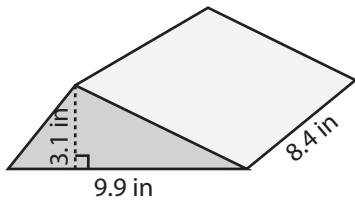
Answer Key

Volume: Prisms & Cylinders

L1DS3

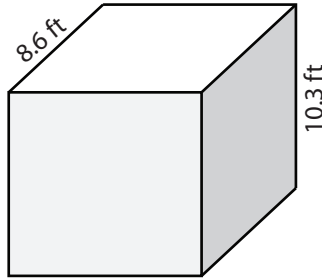
Find the volume of each shape. Round the answer to nearest tenth. (use $\pi = 3.14$)

1)



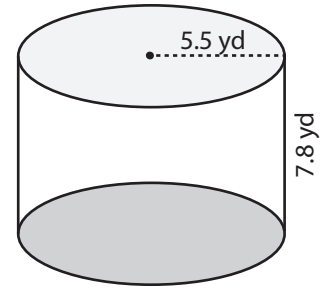
Volume = 128.9 in³

2)




Volume = 740.9 yd³

3)



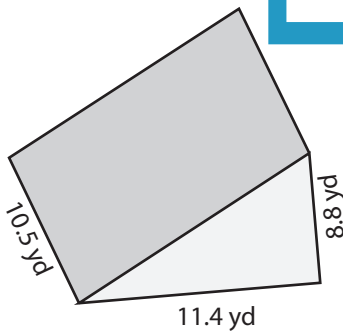
4)



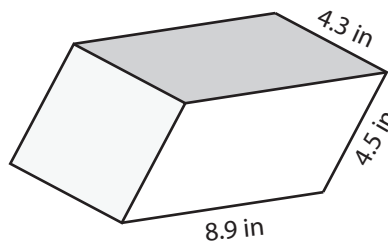
Volume = 232.5 ft³

Volume = 1182.4 in³

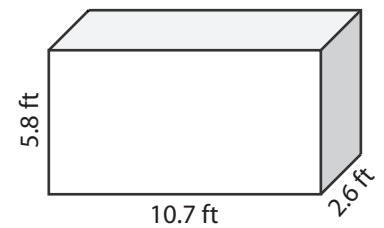
7)



Volume = 526.7 yd³



Volume = 172.2 in³



Volume = 161.4 ft³

PREVIEW

Access the largest collection of worksheets for just **\$19.95** per year!

Members, please log in to download this worksheet.

Log in

Not a member? Please sign up to gain complete access.

Sign up

www.mathworksheets4kids.com