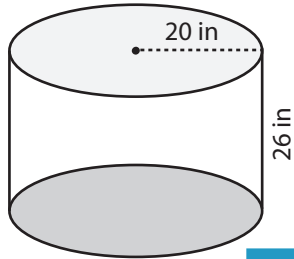


Volume: Prisms & Cylinders

L1MS3

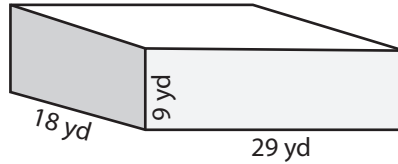
Find the volume of each shape. (use $\pi = 3.14$)

1)



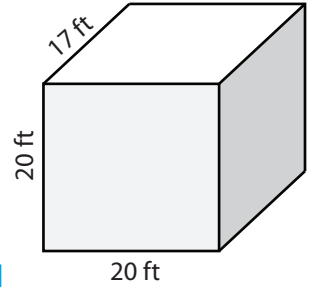
Volume = _____

2)

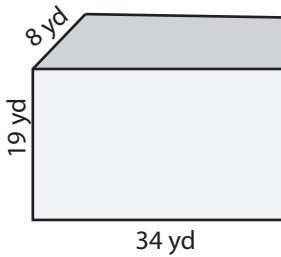


Volume = _____

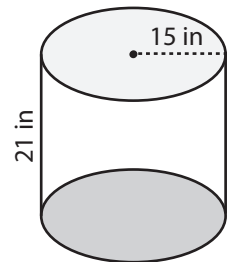
3)



4)

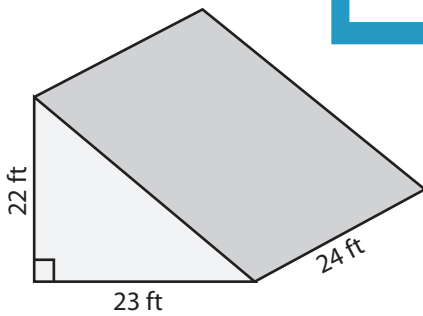


Volume = _____

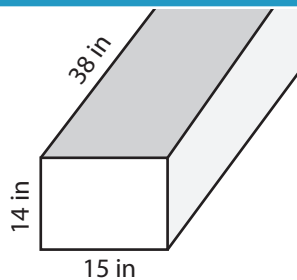


Volume = _____

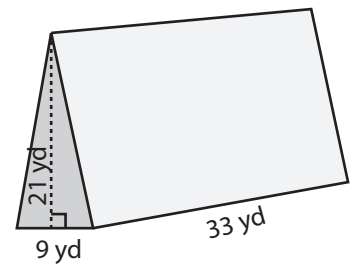
7)



Volume = _____



Volume = _____



Volume = _____

PREVIEW

Access the largest collection of worksheets for just **\$19.95** per year!

Members, please log in to download this worksheet.

Log in

Not a member? Please sign up to gain complete access.

Sign up

www.mathworksheets4kids.com

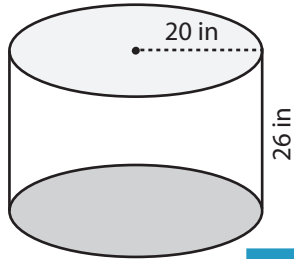
Answer Key

Volume: Prisms & Cylinders

L1MS3

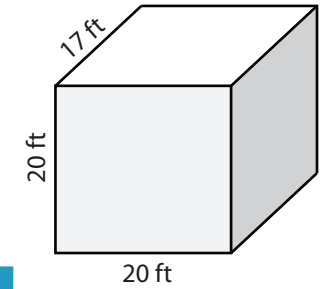
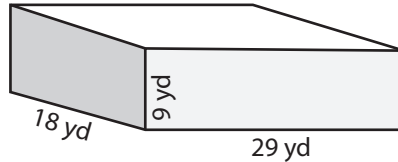
Find the volume of each shape. (use $\pi = 3.14$)

1)



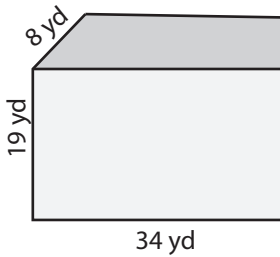
Volume = 32656 in³

2)

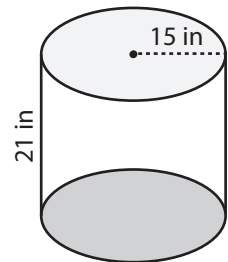


Volume = 6800 ft³

4)

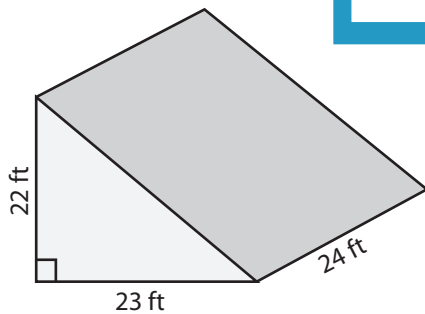


Volume = 5168 yd³

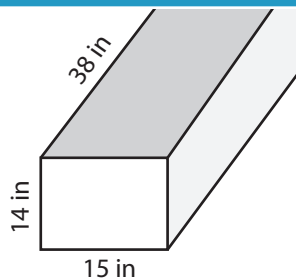


Volume = 14836.5 in³

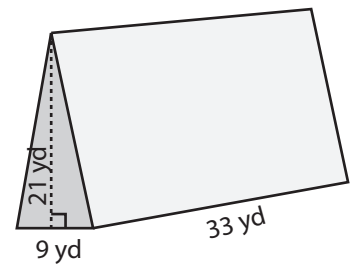
7)



Volume = 6072 ft³



Volume = 7980 in³



Volume = 3118.5 yd³

PREVIEW

Access the largest collection of worksheets for just **\$19.95** per year!

Members, please log in to download this worksheet.

Log in

Not a member? Please sign up to gain complete access.

Sign up

www.mathworksheets4kids.com