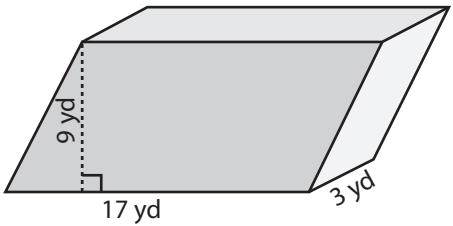


Volume: Prisms & Cylinders

L2ES2

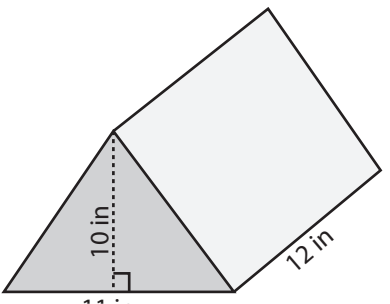
Find the exact volume of each shape.

1)



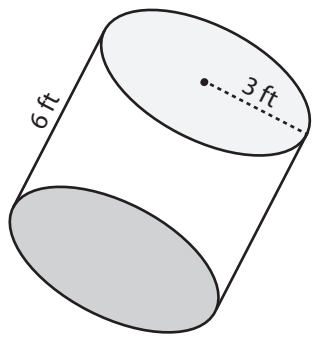
Volume = _____

2)

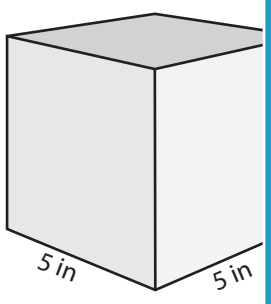


Volume = _____

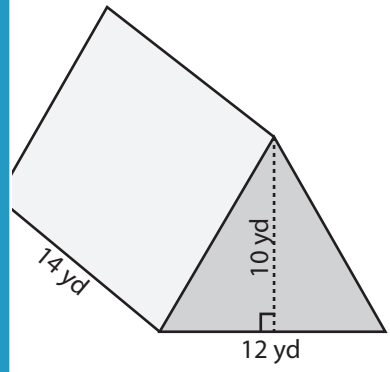
3)



4)

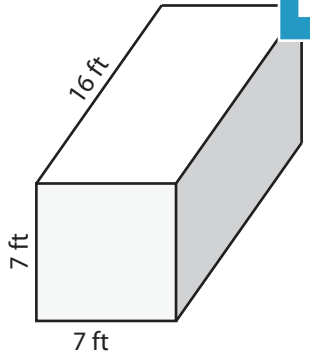


Volume = _____

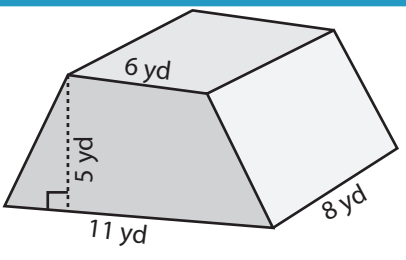


Volume = _____

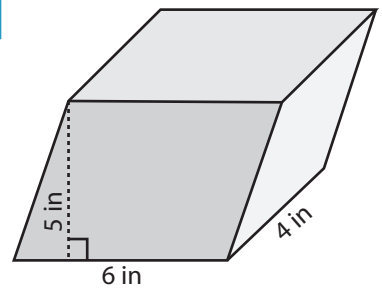
7)



Volume = _____



Volume = _____



Volume = _____

PREVIEW

Access the largest collection of worksheets for just **\$19.95** per year!

Members, please log in to download this worksheet.

Log in

Not a member? Please sign up to gain complete access.

Sign up

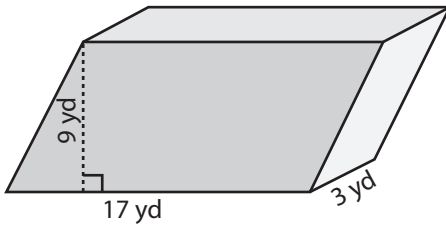
www.mathworksheets4kids.com

Answer Key**Volume: Prisms & Cylinders**

L2ES2

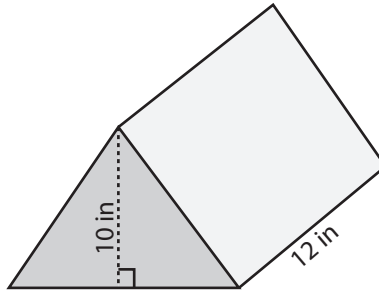
Find the exact volume of each shape.

1)



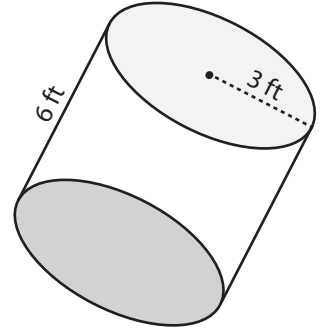
Volume = 459 yd³

2)

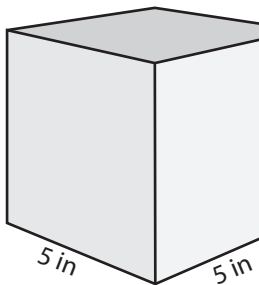


Volume = 54π ft³

3)



4)



Volume = 125 in³

Access the largest collection of
worksheets for just **\$19.95** per year!

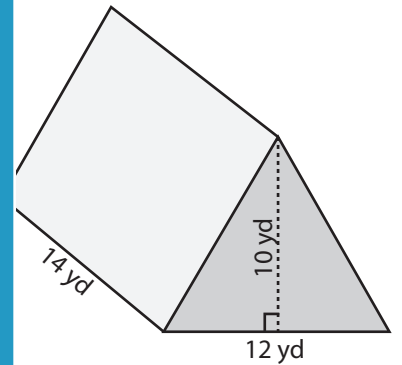
Members, please
log in to
download this
worksheet.

Log in

Not a member?
Please sign up to
gain complete
access.

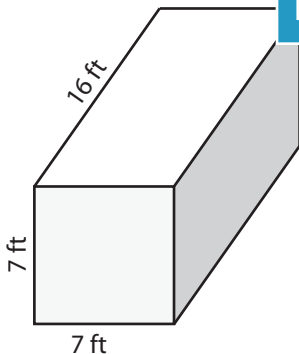
Sign up

www.mathworksheets4kids.com

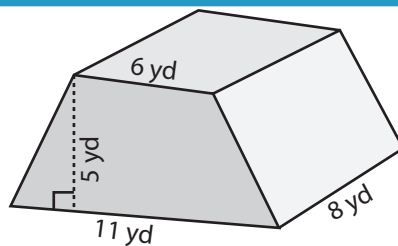


Volume = 840 yd³

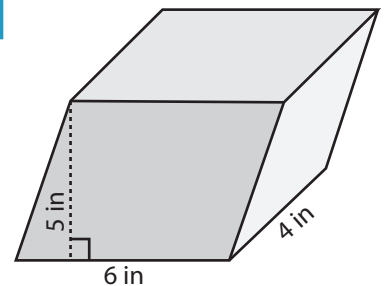
7)



Volume = 784 ft³



Volume = 340 yd³



Volume = 120 in³