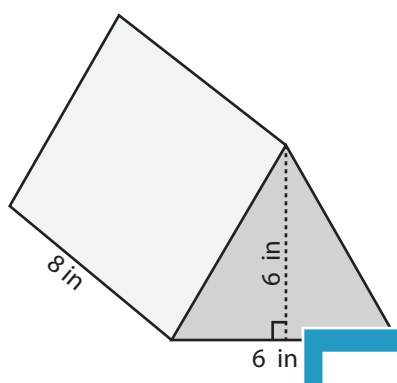


Volume: Prisms & Cylinders

L2ES3

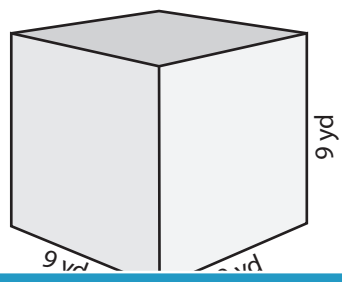
Find the exact volume of each shape.

1)

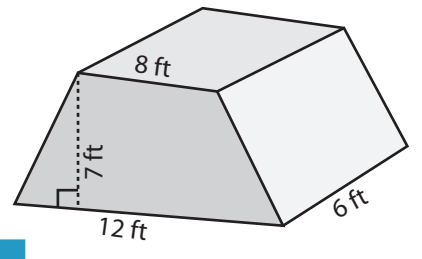


Volume = _____

2)

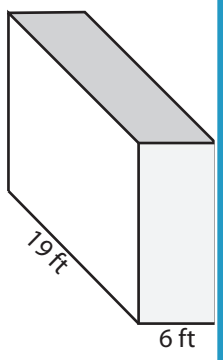


3)



Volume = _____

4)



Volume = _____

PREVIEW

Access the largest collection of worksheets for just **\$19.95** per year!

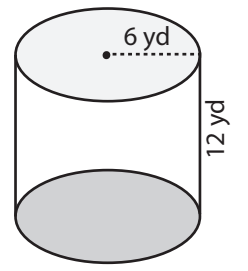
Members, please
log in to
download this
worksheet.

Log in

Not a member?
Please sign up to
gain complete
access.

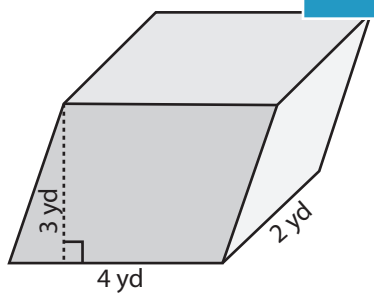
Sign up

www.mathworksheets4kids.com

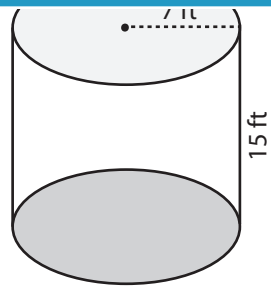


Volume = _____

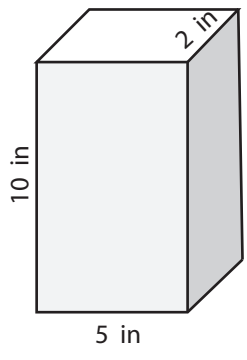
7)



Volume = _____



Volume = _____



Volume = _____

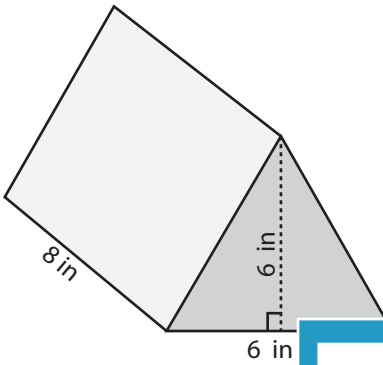
Answer Key

Volume: Prisms & Cylinders

L2ES3

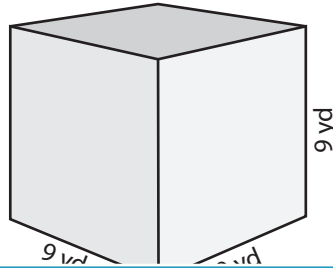
Find the exact volume of each shape.

1)

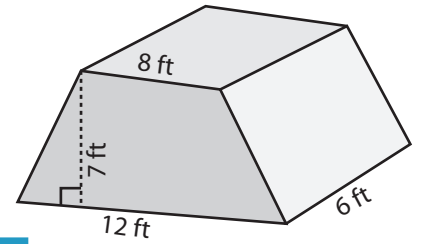


Volume = 144 in³

2)

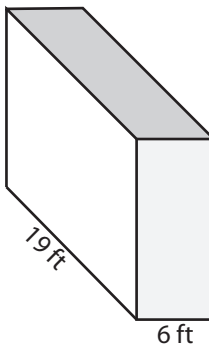


3)

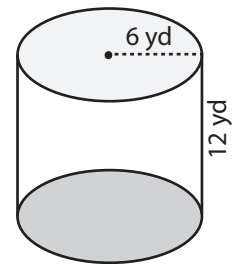


Volume = 420 ft³

4)

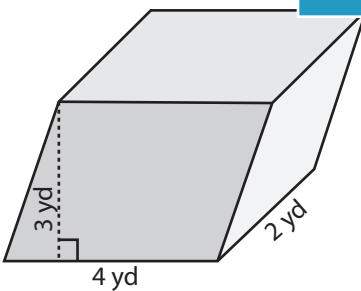


Volume = 1710 ft³

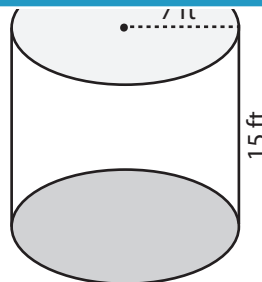


Volume = 432π yd³

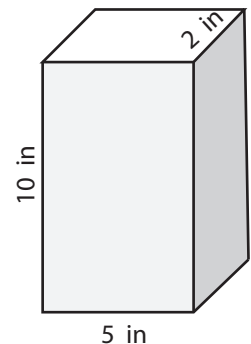
7)



Volume = 24 yd³



Volume = 735π ft³



Volume = 100 in³

PREVIEW

Access the largest collection of worksheets for just **\$19.95** per year!

Members, please log in to download this worksheet.

Log in

Not a member? Please sign up to gain complete access.

Sign up

www.mathworksheets4kids.com