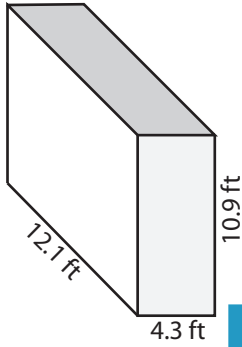


Volume: Prisms & Cylinders

L2DS1

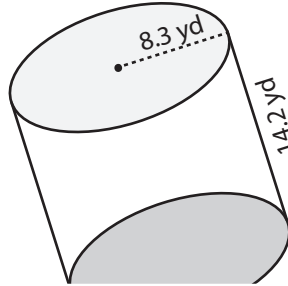
Find the volume of each shape. Round the answer to nearest tenth. (use $\pi = 3.14$)

1)



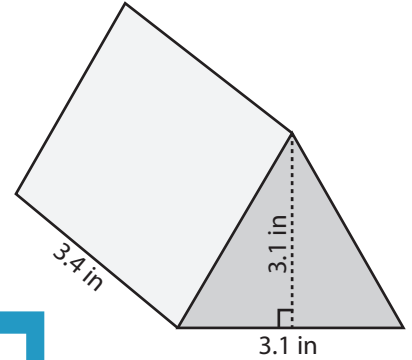
Volume = _____

2)

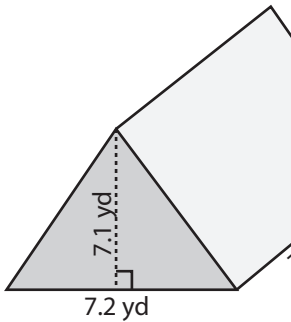


Volume = _____

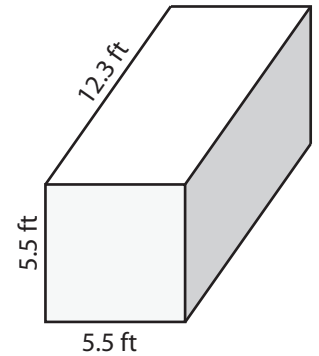
3)



4)

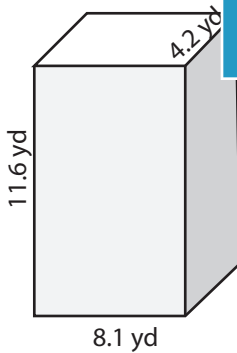


Volume = _____

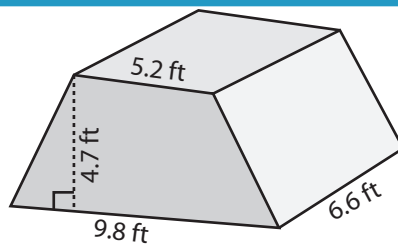


Volume = _____

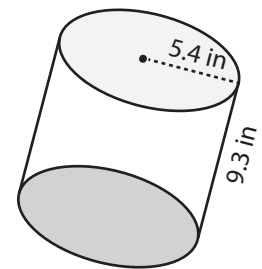
7)



Volume = _____



Volume = _____



Volume = _____

PREVIEW

Access the largest collection of worksheets for just **\$19.95** per year!

Members, please log in to download this worksheet.

Log in

Not a member? Please sign up to gain complete access.

Sign up

www.mathworksheets4kids.com

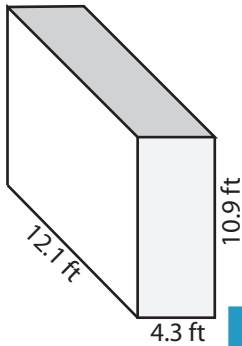
Answer Key

Volume: Prisms & Cylinders

L2DS1

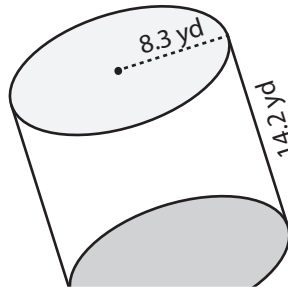
Find the volume of each shape. Round the answer to nearest tenth. (use $\pi = 3.14$)

1)

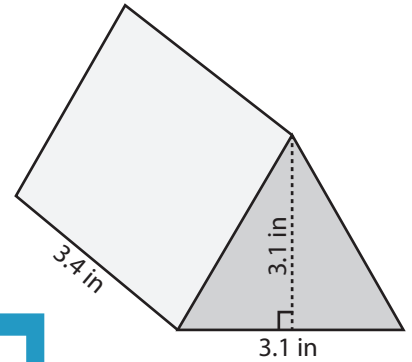


Volume = 567.1 ft³

2)

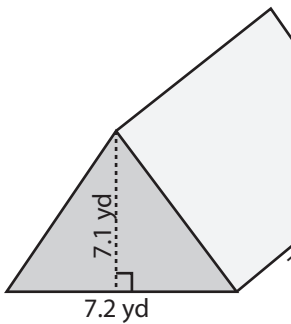


3)

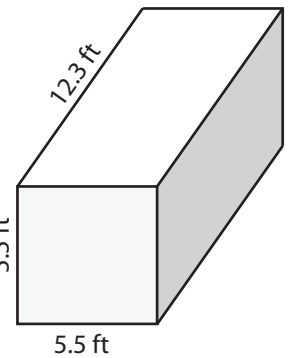


Volume = 16.3 in³

4)

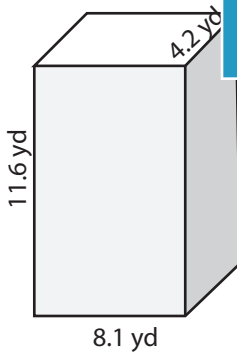


Volume = 186.6 yd³

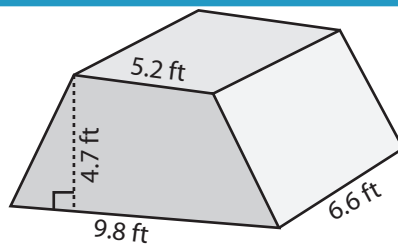


Volume = 372.1 ft³

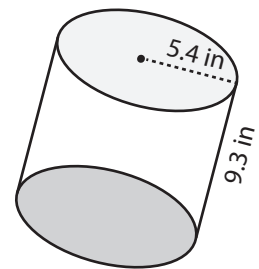
7)



Volume = 394.6 yd³



Volume = 232.7 ft³



Volume = 851.5 in³

PREVIEW

Access the largest collection of worksheets for just **\$19.95** per year!

Members, please log in to download this worksheet.

Log in

Not a member? Please sign up to gain complete access.

Sign up

www.mathworksheets4kids.com